

GLOBAL NAV JEEWAN SECONDARY SCHOOL



SUMMAR VACATIONS **HOLIDAY HOMEWORK**

Class- 7th



Holidays are time when you can connect with your child in many ways. As parents are the first and the most important teacher for a child, we can encourage our child to participate in many educational activities at home and promote his/her quest to learn. Working together will not only help your child to build, learn and develop his/her skills but also strengthen your bond with him/her.

GENERAL INSTRUCTIONS

INSTRUCTIONS FOR STUDENTS:

Try to do your vacation work by yourself. Use separate Note book for each subject.

Writing should be very good and neat.

Do all work under the guidance of your parents and guardians?

Do all work with date & day. Try to do your written work regularly to enhance your writing power.

Pay special attention towards your health and caring.

Don't Play in the sunshine or on hot places.

Try to Pray God Daily.

INSTRUCTIONS FOR PARENTS:

Holiday homework has to be done under the parental guidance

Kindly complete and send the homework in a paper bag on the first day after the summer break.

Make your ward read resource books.→

Make your ward learn and remember his/her parents mobile /landline number, house address, to make him/her independent and secure

Do not miss to take your child, outdoors in the evening.

Do any creative act, which you are good at with your ward and send it to school after vacations. Fix up a time table for your ward to organize his/her daily routine like, watching television,

Playing with friends, studying etc.

Make your child responsible by assigning some of the household responsibilities to him/her like, watering plants, arranging the dining table, organizing his/her room and cupboards, fill the empty water bottles and put them in refrigerator.

Above mentioned guidelines will help your child5 become a smart and an active learner.

Moral activities

1.Plant a tree keeps watering it daily and share the picture with your class teacher.

2.Make a container with the waste plastic fill with the water and hang on a tree for bird to drink water and share the picture with the class teacher

Maths

1. Revise whole syllabus completed in the class
2. Solve the multiplication table of integers which is given on page 15 in your textbook. Also write answers of questions of table in assignment copy.
3. Collect some mathematical concepts about Ram Mandir like its area, Number of pillars, different shapes of stones etc. with the help of internet or visit Ram Mandir in summer vacations then draw Ram Mandir and write mathematical concept related to Ram Mandir in activity file.

CLASS- VII, SUBJECT- MATHEMATICS

WORKSHEET-1 (CH 7-FRACTIONS)

Note:

- Date of submission: 20-11-2023
- Paste and solve the worksheet in your notebook.
- This worksheet will be evaluated for internal assessment

Q1) Write 5 equivalent fraction of the following:

a) $\frac{3}{7}$ b) $\frac{5}{8}$

Q2) Arrange the following fractions in ascending order:

$$\frac{2}{7}, \frac{4}{11}, \frac{3}{10}, \frac{11}{22}, \frac{13}{14}$$

Q3) Arrange the following fractions in descending order:

$$2, \frac{2}{3}, \frac{3}{4}, \frac{5}{6}, \frac{7}{8}, \frac{9}{10}$$

Q4) Fill in the blanks:

- a) The fraction $\frac{38}{95}$ in its lowest term is _____.
- b) The sum of $\frac{2}{7}$, $\frac{4}{7}$ and $\frac{3}{7}$ is _____.
- c) The fractions equivalent to $\frac{3}{8}$ with denominator 40 is _____.

Q5) Solve :

- a) $\frac{7}{12} + \frac{9}{16}$
- b) $3\frac{2}{3} + 1\frac{5}{6} + 2$
- c) $\frac{11}{12} - \frac{2}{6}$
- d) $8\frac{5}{6} - 3\frac{3}{8} + 2\frac{7}{12}$
- e) $6\frac{1}{6} - 5\frac{1}{5} + 3\frac{1}{3}$

Q6) Subtract the sum of $3\frac{5}{9}$ and $3\frac{1}{3}$ from the sum of $5\frac{5}{6}$ and $4\frac{1}{9}$.

Q7) What should be added to $6\frac{7}{15}$ to get $8\frac{1}{5}$?

Q8) Mrs soni bought $7\frac{1}{2}$ litres of milk . Out of this milk , $5\frac{3}{4}$ litres was consumed. How much milk is left with her?

Q9) The cost of pen is ₹ $6\frac{2}{3}$ and that of a pencil is ₹ $4\frac{1}{6}$. Which costs more and by how much?

Q10) A piece of wire , $2\frac{3}{4}$ metres long , broke into two pieces. One piece is $\frac{5}{8}$ metre long . How long is the other piece?

INTEGERS

Very short answer type questions:

1. Find the value of

i) $-8+(-15)$ ii) $+3 + (-4)$ iii) $-9+(+17)$ iv) $+11-(-14)$

2. Arrange the following integers in

i) Ascending order : 3,-3,-9,-16,-1,0

ii) Descending order: 20,-1,0,-5,-21,9

3. State TRUE or FALSE :

Zero is larger than every negative integer.

4. Find the additive inverse of -1987 and $-1/6$.

5. How much less than -2 is -6 ?

6. Is it possible that the product of a positive integer and a negative integer is zero?

7. Is the collection of integers associative under division? Verify your answer by giving an example.

Short answer type questions:

8. Find the products:

i) $(-60) \times (-10) \times (-5) \times (-1)$

ii) $(-1) \times (-1) \times (-1) \dots \dots \dots 150$ times

iii) $(-18) \times (-4) \times (7-3)$

9. Fill in the blanks:

i) $0 \div (-20) = \dots \dots \dots$

ii) $-18 \div \dots \dots \dots = 18$

iii) $\dots \dots \dots \div (-3) = 186$

10. The sum of the two integers

11. Evaluate:

i) $168 \div (-14)$

ii) $(-336) \div (-21)$

Long answer type questions:

12. Simplify:

i) $(-11) \times (-15) + (-11) \times (-25)$

ii) $(-250) \times 782 \times (-4)$

iii) $425 + (-207) + 75$

iv) $-142 + 311 + (-58)$

v) $[(-13) - (-27)] + [-25 - (-40)]$

13. Subtract -134 from the sum of 38 and -87.

14. If a clock has been losing 3 minutes every day, then how much fast was it six days ago?

15. Verify the property: if $a = -3$, $b = 7$, $c = -9$

i) $(a+b)+c = a+(b+c)$

ii) $(a \times b) \times c = a \times (b \times c)$

iii) $a \times (b+c) = (a \times b) + (a \times c)$

iv) $a \times (b - c) = (a \times b) - (a \times c)$

16. The difference of an integer 'p' and -8 is 3. Find the value of 'p'

17. By what number should (-240) be divided to obtain 16?

18. The product of two integers is -120. If one of the integers is -30, find the other number.

19) Add the product of (-16) and (-9) to the quotient of (-132) by 6?

20. Find $36 - (-64)$ and $(-64) - 36$. Are they equal?

Decimals

Q1 Which is greater of: 48.23 and 36.35

Q2 Express $1359/1000$ as decimal.

Q3 Add 16.44, 8.524 and 26

Q4 Find the value of: $108.032 - 88.9$

Q5 By how much 34.9 should be increased to get 70.96. Simplify $35.9 - 16.09 + 88.2 - 50.6$

Q6 Find the product of: 3.25×128 . Multiply 0.345 by 0.0237

Q7 Find the area of a rectangle whose length is 5.5 m and breadth is 3.4 m.

Q8 One kg of rice cost Rs 42.65. What will be the cost of 15 kg of rice.

Q9 Divide $128.9/100$

Q10 Divide $93.45/25$

Q11 Divide $48.08/400$

Q12 The cost of 24 pens is rs 2986.80. Find the cost of one pen.

Q13 The product of two decimals is 1.8576, if one of the decimals is .54. Find the other.

Q14 Product of two decimals is 42.987, if one of them is 12.46, find the other.

Q15 A car covers a distance of 89.1 km in 2.2 hours. What is the average distance covered by it in one hour?

Q16 Each side of a regular polygon is 2.5 cm in length. The perimeter of the polygon is 12.5 cm. How many sides does the polygon have?

Q17 The sides of an equilateral triangle is 3.5 cm. Find its perimeter.

Q18 Express as Rupees using Decimal

A.235 paise

B.7 Rs 7 pais

ENGLISH

1. Revise all syllabus which has done in the class.
2. Read newspaper daily.
3. What would you like to do to improve the lives of poor children?

Write a paragraph about it on A4 size sheet.

4. Do 20 synonyms and 20 antonyms on A4 size sheet
5. Do Conversation with your family member and friends. Make a short clip and send it on WhatsApp (minimum 3 conversation clip)

CLASS ROOM CONVERSATION

What page are we on?

1. I am ready. May I start it?
2. May I go out?
3. May I answer the question?
4. May I switch off the lights?
5. Teacher, please can you repeat again?
6. May I open the window?
7. May we pack our things now?
8. May I join the class/group?
9. What is the homework?
10. Do we have to write this down?
11. Sorry, for being late.
12. May I open / close the window?
13. Can I come in?
14. Can you explain it once more, please?
15. May I go out please?
16. Is this right?
17. Is this correct?
18. I am sorry. I did not hear.
19. Can you speak louder, please?
20. Which book?
21. Can you explain that again?
22. When is the exam?
23. When is the homework for?
24. I have done this.

25. May I go to the toilet?
26. Can you help me, please?

CONVERSATION AT HOME

1. I love you, mummy.
2. Could you bring me a glass of water?
3. I will get up early in the morning.
5. She is my cousin sister.
6. Where is a father?
7. They are my friends.
8. I am going to the playground.
9. It is very hot today. Isn't it?
10. I want more money.
11. I am sick.
12. I remember everything.
13. I just made it
14. I love to play video games.
15. I apologize.
16. Thank you mummy, bye.

ADJECTIVES

1. Match the opposites

old
lazy
big
fast
cold
generous
mean
naughty
bad
shy
thin

small
selfish
confident
new
kind
fat
hard-working
hot
careful
slow
good

2. Choose the correct form:

	Comparative	Superlative
Old		
Lazy		
generous		
mean		
fast		
big		
small		
selfish		
confident		
new		
Cold		
Kind		
Generous		
Fat		
Hard-working		
Naughty		
Hot		
bad		
good		

Name: _____

Date: _____



Pronouns



Rewrite the sentences with pronouns.

1. John loved tennis. John played tennis every day.

2. Sandy ate too much cake. Sandy had a headache.

3. The rugby team played well. The team won the final.

4. Sarah liked playing chess. Sarah was a great player.

5. The boys enjoyed running. The boys ran in races.

6. The birds flew overhead. The birds flew together.



Choose a comparative and a superlative form.

All of my friends are nice, but Tom is _____ (nice)

Mary is _____ person in her family. (tall)

Everest is _____ mountain in the world. (high)

Sam is _____ student than Peter. (good)

Rabbits are _____ than horses. (small)

Sydney is _____ city in Australia. (large)

This church is _____ building in the town. (old)

This is _____ village I have ever seen. (pretty)

Compariosn of adjectives

Fill in the table:

		the nearest
	lazier	
beautiful		
		the worst
	bigger	
		the thinnest
	hotter	
old		
	more expensive	
difficult		
		the best
	fatter	
		the most dangerous
	happier	

Review 1 - Subject Pronouns

Write: He, She, It, They, We or You

1. Pam is a gymnast. _____ is very talented.
2. Tom and Bill are in the yard. _____ are playing ball.
3. This book is green. _____ is new.
4. Tom is on the floor. _____ is with his toy.
5. Look at this. _____ is a triangle.
6. This parrot is nice. _____ is green and red.
7. The children are on the bus. _____ ride to school.
8. These books are Mike's. _____ are green and blue.
9. Bill is a runner. _____ runs 10 kilometers.
10. Mona and Liz are in the room. _____ are very busy.
11. My dad and I are in Paris. _____ are happy.
12. Mary and you are students. _____ are at school.

What Kind of Sentence?

Directions: Read each sentence below. Write if it is a command, question, exclamation, or statement.

1. Please clean your room before we leave for school.

2. May I please have an ice cream sundae after dinner?

3. We won the candle selling contest!

4. This book about the Gold Rush is my favorite one to read.

5. Why did the television program end so early?

6. Stop! The sink is starting to overflow!

7. Turn the lights off and go to bed.

8. I like to eat apples dipped in peanut butter.

9. Is purple the best choice of color for your hair?

10. Don't put your hand on the stove when it is hot.

Identify the kinds of noun (Proper, Common, Collective, Material, Abstract) from the words underlined in the given sentences:

1. The village lies in the foothills. _____ noun.
2. Happiness shared is happiness doubled. _____ noun.
3. The herd of elephants moved towards the river. _____ noun.
4. Honesty is the best policy. _____ noun.
5. Prakash is a cricket player. _____ noun.
6. He went to the hospital. _____ noun.
7. The swarm of bees flew around the flowers. _____ noun.
8. Saran had an excellent collection of coins. _____ noun.
9. The necklace is made of gold. _____ noun.
10. Many people have climbed Mount Everest. _____ noun.
11. I love chocolates. _____ noun.
12. A pack of wolves started howling. _____ noun.
13. Freedom is our birth right. _____ noun.
14. Pongal is my favourite festival. _____ noun.
15. Kavin went to the bank to deposit money. _____ noun.
16. Ram stood first in the class. _____ noun.
17. Charity begins at home. _____ noun.
18. The wooden box was placed in the attic. _____ noun.
19. Trichy is my native place. _____ noun.
20. I saw a pride of lions across the stream. _____ noun.

The Gallant Tailor

Read the story. Then answer the questions.

One summer morning a little tailor was sitting near the window, and working, when an old woman crying, "Good jelly to sell!" So he called out, the poor woman came and gave him a jelly. "This jelly gives me strength," cried the little tailor, and he cut the loaf, and spread the jelly on it, and went on stitching. The scent of the sweet jelly was spreading and the quantities of flies, attracted by it. The tailor, took a ragged cloth, and beat it them and when he counted the slain, so seven lying dead before him. "The whole world shall know it," So he cut out a belt, stitched it, and put on it in large capitals "Seven at one blow!"The tailor fastened the belt round him, and he found an old cheese, which he put in his pocket. A bird had caught in the bushes outside, so he took that and put it in his pocket. Then he set out gallantly on his way led over a mountain, and when he reached the peak he saw a giant there. The tailor said to him, "Comrade, I am on the way to seek my fortune."The little tailor showed the giant his belt; "Seven at one blow!" Then the giant took up a stone and squeezed it hard that water came out of it. "You can do that," said the giant. Then the tailor put his hand in his pocket and took out the cheese and squeezed it, so that it ran out of it. "Well," said the giant, then he took up a stone and threw it so high that it was out of sight. "Well thrown," said the tailor; so he took out the bird, and threw it into the air. Then they went on, and came to a cherry-tree, the giant took hold of the topmost branches, where the ripest fruit hung, and pulling them downwards, gave them to the tailor to hold. But the tailor was weak to hold the tree, and as the giant let go, the tree sprang back, and the tailor was caught up into the air. And he dropped down without any damage, so that once more the little tailor got the better of him. Then the giant said, "As you are a gallant fellow, come with me to our den." The tailor was quite willing, and followed him. When they reached to the den the giant showed him a bed, the bed was big for him so he crept into a corner to sleep. In the midnight the giant took a great staff of iron and beat the bed with one stroke, and supposed he had made an end of a tailor. Early in the morning the giants went into the wood and when they saw the tailor coming after them alive and merry, they were frightened and ran away in all haste.

Answer each question.

1. Why the quantities of flies did come to the tailor and what did he do then?
2. What did the tailor want to tell the world?
3. Where did the tailor go and to whom he did meet?
4. How did the giant and the tailor show their strength to each other?
5. What did happen in the den?

SCIENCE

Physics

All Holiday homework you have to write in Science practical file.

- Q1) with help of your family members you have to measure Length of Bed, Room, Bike or scooter, car, Balcony, Door, window, key, Notebook and write Down these value in your practical file
Q2) To Demonstrate that matter has mass.
Q3) Learn and write All Q/Ans and important Topics of ch 1 in your holiday homework
Q4) To observe the shape, volume and compressibility of solid, liquid and gas state.
Q5) To observe the characteristics of different matter and classify them into solids, liquids and gases.

Chemistry

- Q1) Draw a Table and write Down chemicals use in Talcum powder, cream, Antiperspirant and Lipstick
Q2) Draw a Table and write some compounds name and their constituent elements
Q3) Learn and write All Q/Ans and important Topics of ch 1 in your holiday homework
Q4) In Holiday homework copy you have to write Name and symbol of first 20 elements along with their atomic number.
Q5) In Holiday homework copy write About 10 Indian Male and Female scientists and their inventions and Their Biography.




Biology

- Q1) Visit any park with your family members and Discuss about **kinds of Leaves, Function of Leaf and structure of Leaf.** And write Down your experience in your Holiday homework copy
Q2) Do activity in practical file
To show that leaf prepares starch during photosynthesis
Q3) To study that water vapour is released during transpiration
Q4) Learn and write All Q/Ans and important Topics of ch 1 in your holiday homework
Q5) To draw different types of leaves and study their structure and types of venation.

COMPLETE THESE WORKSHEET:-

Plants

 Name _____



Word Box
pollen roots
fruits flowers
leaves branches
water stem
roots seeds

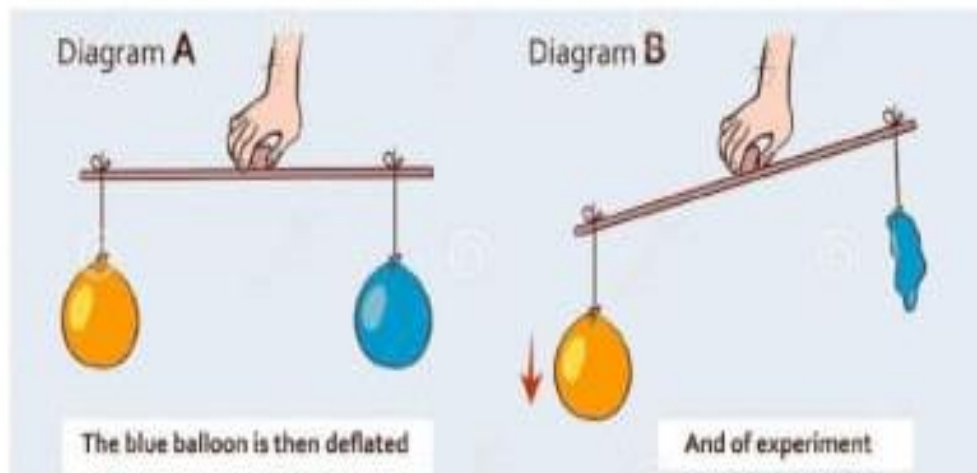
Across:

- Plants need sunlight, air and _____ to grow.
- the pretty, colorful part of the plant
- These grow off of the stem.
- carries water and food to the rest of the plant
- the food we eat that is made by some plants

Down:

- These help to make food for the plant.
- powdery substance in the middle of a flower
- used to grow a plant
- holds the plant in the ground

1. Activity below shows that living things and non-living things have mass and occupy space. Complete the table.



Observation	The air in blue balloon escapes and the ruler tilts to the left.
Conclusion	Air has and space.

- 2.



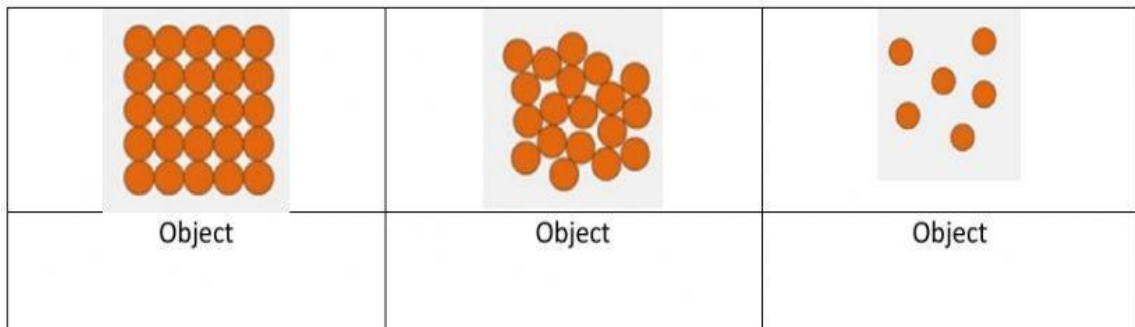
A boy found that his flat bicycle tyre was inflated after being pumped. Why does this happen. Fill in blanks.

Air in the bicycle tyre.


3. Choose 'Yes' on the substances which are **matter** and 'No' on the substances which are **not matter**.

Smoke from factory	
Sound	
Lightning	
Soil	

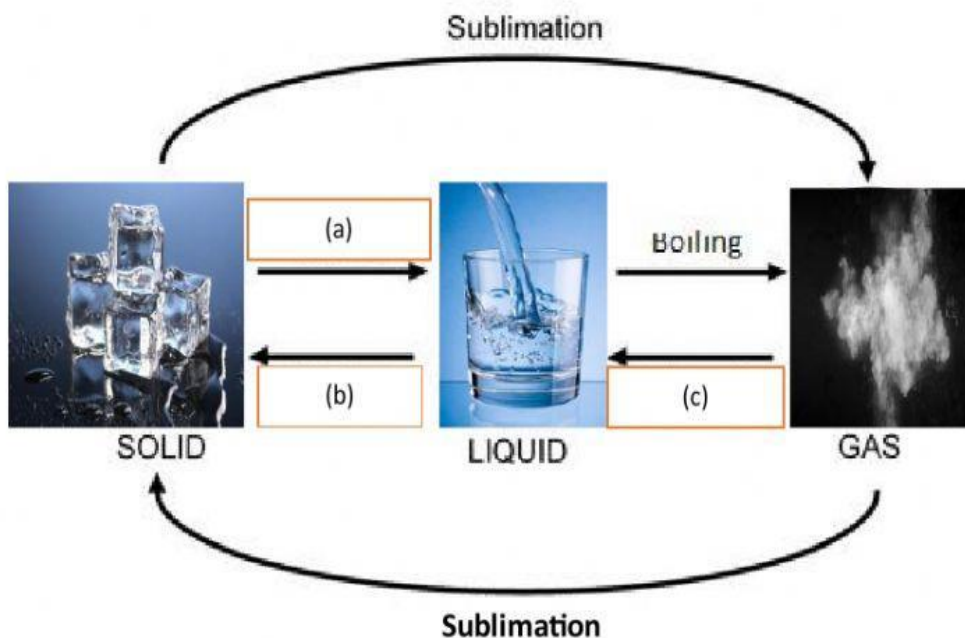
4. Diagram below shows particles arrangement in three states of matter. Which of the object represents the matter.



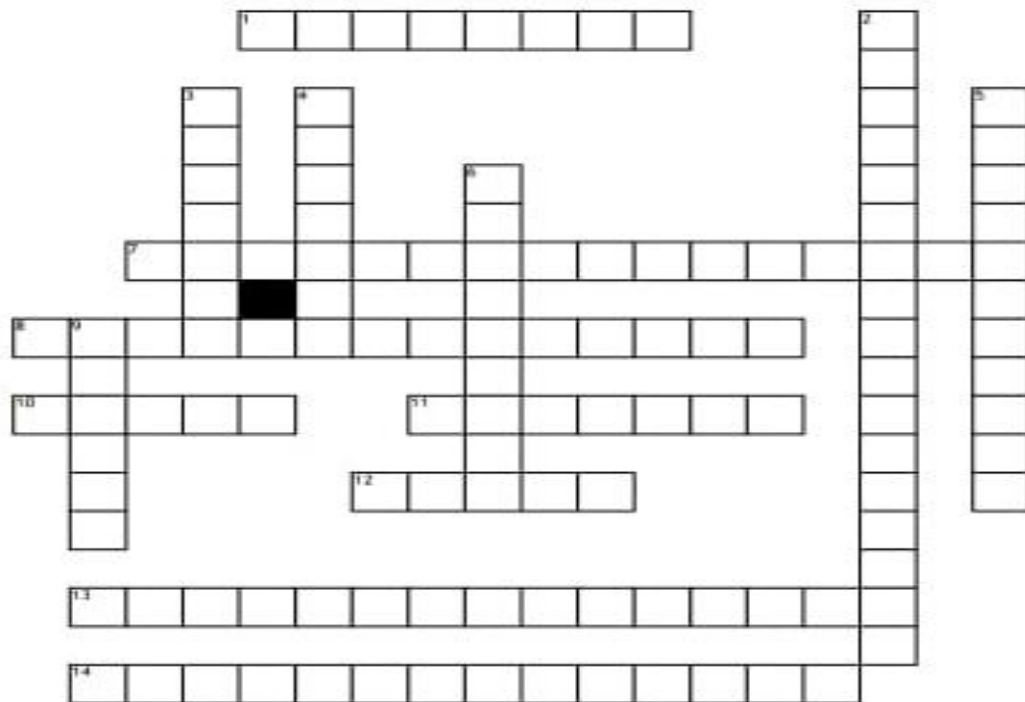
5. Based on the diagram below, choose the states of matter.



6. Complete the diagram below.



Leaf Crossword



Across

- 1. area in spongy layer for gases
- 7. composed of xylem and phloem
- 8. used for protection; on the upper side
- 10. collects sunlight
- 11. connects stem to blade
- 12. moves water and minerals through plant

- 13. contains few chloroplasts, irregular shaped, loosely packed allowing for air spaces
- 14. used for protection; on the lower side

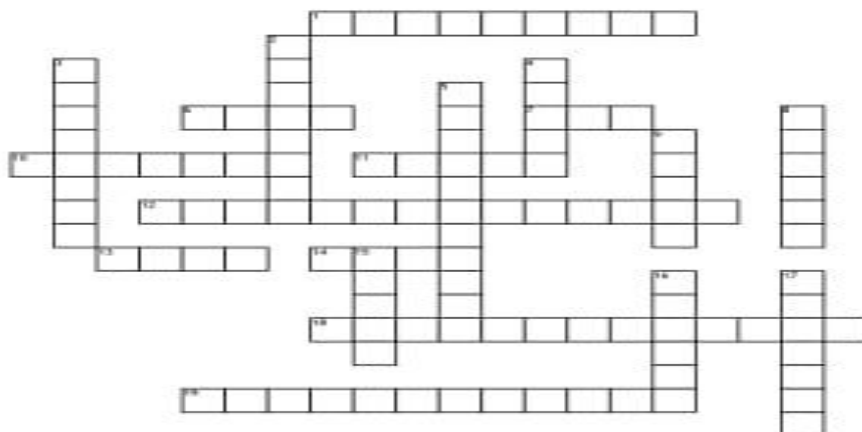
Down

- 2. contains many chloroplast, elongated cells, located closest to the upper epidermis

- 3. holes in lower epidermis which allows CO₂ and O₂ in and out of leaf

- 4. waxy covering which prevents water loss
- 5. contains chlorophyll which absorbs energy
- 6. control the opening and closing of the stomate
- 9. moves sugar through plant

Parts of A Plant



Across

- 1. controls what goes in and out of stomates
- 6. absorbs sunlight
- 7. female sex cell
- 10. where water comes out as gas
- 11. carries water upward
- 12. when plants make their own food

- 13. structures the plant

- 14. brings nutrients and water into plant
- 18. when water is moved out of plant as gas

- 19. when a male and female sex cell combine

Down

- 2. bottom part of stamen

- 3. what is taken in
- 4. male sex cell
- 5. when pollen and egg are formed

- 8. female flower part
- 9. a ripened ovary
- 15. where the egg lives

- 16. male flower part
- 17. what is created

HINDI

1. नई आशाएँ-पाठ तीन पढ़ो और पाठ में से किन्हीं दस शब्दों का वर्ण विच्छेद करो।
2. व्याकरण आलोक-पाठ चार पढ़ो तथा पाठ में से पाँच पर्यायवाची शब्द व पाँच विलोम शब्द छाँट कर लिखो।
3. कार्य पत्रिका दो

रचनात्मक कार्य

1. -ग्लोबल वॉर्मिंग का मनुष्य के जीवन पर क्या प्रभाव पड़ा है। अपने विचार प्रकट कीजिए।
2. -आज कल कई देशों के लोग बाढ़ की समस्या से जूझ रहे हैं, आप इन समस्याओं का सामना कैसे करेंगे। अपने विचार व्यक्त करो।
3. -किसी प्रसिद्ध साहित्यकार का सचित्र जीवन परिचय देते हुए उनकी रचनाओं को दर्शाइए। (प्रोजेक्ट कार्य)

प्र.2 निम्नलिखित शब्दों से उपसर्ग व मूल शब्द अलग कीजिए -
उपहार, सहपाठी, बेईमान, लाइलाज, अधखिला, अभिमान।

प्र.3 निम्नलिखित शब्द द्वारा रिक्त स्थान की पूर्ति कीजिए -
(क) — में सारे काम कर लेने चाहिए। (दीन/दिन)
(ख) हमें बड़ों के — स्पर्श करने चाहिए। (-वरण/वारण)

(ग) शिक्षा — दिन-रात मेहनत करता है। (-वालक/वालाक)

(घ) सूर्य पूर्व — से उदय होता है। (दश/दिशा)

(ङ) — नदी किनारे खड़ी है। (तराणी/तरणी)

(च) ऋषि-मुनि जंगल में — करते हैं। (ताप/तप)

(छ) वह अपनी — का पक्का है। (जवान/जवान)

(ज) अन्त ने साईबाबा के मंदिर में सोने का — चढ़ाया। (दण्ड/दण्ड)

(झ) — पवित्रता का प्रतीक है। (जलज/जलज)

प्र.4 निम्नलिखित शब्द-युग्मों के अर्थ लिखिए -

- क. वरम - चर्म
- ख. चपला - चपल
- ग. तरंग - तुरंग
- घ. दूत - दूत
- ङ. द्रव - द्रव्य
- च. द्वीप - द्वीप
- छ. धान - धान्य

व्याकरण :-

प्र.५ निम्नलिखित शब्दों में से जो अनुपपुत्र हो उसे आट दें -

- (क) हाथ - पाणि, उस्त, सुरभि
- (ख) गाध - धेनु, गौ, अर
- (ग) स्वर्ण - दक्ष, कनक, कर, हेम
- (घ) चान्दनी - ज्योत्स्ना, दामिनी, कौमुदी
- (ङ) बाल्य - सोना, रिपु, अरि ।

प्र.६ निम्नलिखित शब्दों के दो-दो पर्यायवाची शब्द लिखिए -

- (क) जंगल, दुनियां, नौका, दबल, बिजली, बारीर, पवन, पहाड़ ।

प्र.७ निम्नलिखित संज्ञा शब्दों से विशेषण बनाइए -

- प्यास, श्रद्धा, इतिहास, संचय, रवाट, गाँव, अंत, जरा,
- जापान, कुल, भारत, गर्व, मामा, विष, इफा, गुण, श्री

SOCIAL STUDIES

1. Do a project on the Indian Constitution, bringing out its unique features.
2. Write about the role of missionaries in spreading Christianity in your History/Civics notebook.
3. Make a poster to show the impact of Global Warming.
4. Prepare for UT and revise all the chapters done till now.

1. On an outline map of India locate the following:

a) Indian states

b) Neighboring countries

c) Water bodies on three sides of India

2. On the world map locate the following: a). Continents

b) Oceans

1. Draw five major political parties symbol in your Scrapbook

2. How many constituencies in Delhi? Write their name with their representative within a party symbol.

3. What are the universal adult franchises?

4. Motivate your elder for voting in your area.

5. Write five Slogan related with election.

6. Paste 5 main news of elections of different parties.

Quiz

1. Which of the following is not a feature of Election system in India?

A. Universal Adult Franchise B. Secret Voting

C. Reservation of seats in the legislature for the members of Scheduled Castes and Scheduled Tribes

D. Communal Electorate

2. Elections in India for Parliament and State Legislatures are conducted by.....

A. President B. State Election Commission C. Governor D. Election Commission of India

3. Members of Election Commission are appointed by.....

A. President of India B. Prime Minister of India C. Elected by the people D. Chief Justice of India

4. Which article of the Indian constitution says that will be an election commission in India?

A. Article 124 B. Article 342 C. Article 324 D. Article 115

5. The number of seats reserved for scheduled caste in the Lok Sabha is:

A. 59 B. 79 C. 89 D. 99

6. Which Articles in the Constitution give provisions for the electoral system in our country?

A. Articles 124-128 B. Articles 324-329 C. Articles 256-259 D. Articles 274-279

7. The elections for Lok Sabha are held every:

A. 3 years B. 4 years C. 5 years D. 6 years

8. Which among the following statements is/are false?

1. For qualifying to the Lok Sabha, a person must be at least 25 years of age
2. A person can be a member of both Lok Sabha and Rajya Sabha at the same time
3. A person belonging to Scheduled Caste and Scheduled Tribe can contest elections from a general seat also, and not just with the reserved seat
4. If a member of either of the Houses votes against the directions given by his party, he can be deemed to be disqualified

Code:

A. Only 1 B. Only 2 and 4 C. Only 3 D. Only 2

9. What is the maximum allowed duration between the last session of the dissolved Lok Sabha and the recalling of the Lok Sabha?

A. 2 months B. 4 months C. 5 months D. 6 months

10. Which is the smallest Lok Sabha Constituency in General Elections by area?

A. Delhi Sadar B. Mumbai South C. Kolkata North West D. Chandni Chowk, Delhi

Worksheet-

A. Fill in the blanks :-

1. _____ was the first Roman ruler to embrace Christianity.
 2. _____ plundered the Roman treasures, killed and enslaved many Romans.
 3. The Roman Empire ended in _____ CE.
 4. A total of _____ crusades were fought to recapture the Holy land from the Turks.
 5. _____ became the residence for monks.
- B. Write True or False :-
1. St Paul played an active role in spreading Christianity in the Roman Empire.
 2. The persecution of Christians ended in around fourth century C.E. ____
 3. The king granted land to the serfs in return for fighting battles. ____
 4. Monasteries were guided by the motto, " service to society ". ____
 5. The crusades put an end to trade between Asia and Europe. ____

D. Answer the following questions :-

1. Draw and explain the feudal society in Medieval Europe
2. What role did Constantine play in the spread of Christianity?
3. What were the events experienced in Medieval Europe?
4. What led to the decline of the Byzantine Empire?
5. How did the crusades pave the way for the birth of Renaissance in Europe?

French

1. Revision of April and May syllabus.

2. make a dialogue writing for meeting your friend.

Sanskrit

i. पाठ-1 और 2 याद करो और लिखो ।

ii. कार्य पत्रिका -1 और 2 करो ।

कार्यपत्रिका - 1

Worksheet-1

वैभवस्य जन्मदिवसः

नाम कक्षा दिनांक

1. अधोलिखितवाक्यानां निर्देशानुसारं वचनं परिवर्तयत । (निम्नलिखित वाक्यों का निर्देशानुसार वचन बदलिए ।)

(क) अहं फलं खादामि । (द्विवचने)

(ख) कन्ये मञ्चे गास्यतः । (एकवचने)

(ग) वयं चित्रं रचयामः । (द्विवचने)

(घ) तौ कुत्र वत्स्यतः ? (बहुवचने)

(ङ) ताः शिक्षिकाः गच्छन्ति । (एकवचने)

2. प्रदत्तशब्दानां संस्कृतपर्यायपदं लिखत । (दिए गए शब्दों के संस्कृत के पर्याय शब्द लिखिए ।)

(क) मिलकर

(ख) किसलिए

(ग) जोर से

(घ) गेंद से

(ङ) मेरे लिए

3. प्रदत्तधातूनाम् लट्लकारे लृट्लकारे च रूपाणि पूर्यत । (दिए गई क्रियाओं के लट्लकार और लृट्लकार के रूप पूरे कीजिए ।)

पठ् (लट्लकारः)

पुरुषः एकवचनम् द्विवचनम् बहुवचनम्

प्रथमः पठति

मध्यमः पठथः

उत्तमः पठामः

अस् (लट्लकारः)

प्रथमः	अस्ति
मध्यमः	स्थः
उत्तमः	स्मः

कृ (लृट्लकारः)

प्रथमः	करिष्यतः
मध्यम	करिष्यथ
उत्तम	करिष्यामि

4. प्रदत्तप्रश्नान् एकपदेन उत्तरत। (दिए गए प्रश्नों के उत्तर एक शब्द में दीजिए।)

- (क) महिला: कुत्र स्थास्यन्ति?
- (ख) सायं गृहे किं भविष्यति?
- (ग) पिता उपहारे कानि आनेष्यति?
- (घ) कन्ये केन क्रीडिष्यतः?
- (ङ) कः पाठं पठिष्यति?

5. प्रदत्तपदानां निर्देशानुसारं लकारपरिवर्तनं कुरुत। (दिए गए शब्दों के निर्देशानुसार काल परिवर्तन कीजिए।)

- (क) करोमि (लृट्लकारे)
- (ख) गास्यति (लट्लकारे)
- (ग) पठथ (लृट्लकारे)
- (घ) चलतः (लृट्लकारे)
- (ङ) पठिष्यथ (लट्लकारे)

शुकः काकः च

नाम कक्षा दिनांक

1. गद्यांशं पठित्वा प्रश्नान् उत्तरत। (गद्यांश पढ़कर प्रश्नों के उत्तर दीजिए।)

कस्मिंश्चित् वृक्षे एकः काकः एकः शुकः च अवसताम्। तयोः मध्ये घनिष्ठा मैत्री आसीत्। शुकः सर्वदा आत्मानं सुन्दरम् अमन्यत। अतः सः सर्वदा काकम् उपाहसत्।

(क) एकपदेन उत्तरत। (एक शब्द में उत्तर दीजिए।)

(i) तयोः मध्ये का आसीत्?

(ii) शुकः सर्वदा कम् उपाहसत्?

(ख) पूर्णवाक्येन उत्तरत। (पूरे वाक्य में उत्तर दीजिए।)

(i) शुकः सर्वदा कम् सुन्दरम् अमन्यत?

.....

(ii) कस्मिंश्चित् वृक्षे कौ अवसताम्?

.....

(ग) भाषिक-कार्यम्। (भाषा-कार्य।)

(i) 'मैत्री' पदस्य विशेषणपदं लिखत।

(1) आत्मानम् (2) सुन्दरम् (3) घनिष्ठा

(ii) 'शुकः' पदस्य क्रियापदं चिनुत।

(1) अवसताम् (2) अमन्यत (3) आसीत्

2. प्रदत्तपदानां बहुवचनरूपं लिखत। (दिए गए शब्दों के बहुवचन रूप लिखिए।)

(क) अवसत् (ख) आसीत्

(ग) अकरोत् (घ) अनृत्यताम्

(ङ) अतिष्ठताम्

3. प्रदत्तहिंदीशब्दानां संस्कृतपदानि लिखत। (दिए गए हिंदी शब्दों के लिए संस्कृत शब्द लिखिए।)

- (क) दुख (ख) दो तोते
- (ग) पेड़ पर (घ) वे सब (स्त्री.)
- (ङ) किसान

4. प्रदत्तपदानां हिंदीशब्दान् लिखत। (दिए गए पदों के लिए हिंदी शब्द लिखिए।)

- (क) आस्ताम् (ख) अकुर्वन्
- (ग) अवसत् (घ) अनृत्यत्
- (ङ) अतिष्ठताम्

5. निम्नवाक्यानां निर्दिष्टलकारे परिवर्तनं कुरुत। (निम्नलिखित वाक्यों में निर्देशानुसार काल परिवर्तन कीजिए।)

- (क) बालकाः फलानि खादन्ति। (लृट्लकारे)
- (ख) छात्रौ कार्यम् अकुरुताम्। (लट्लकारे)
- (ग) सुरेखा पाठं स्मरिष्यति। (लङ्लकारे)
- (घ) आचार्यः कक्षां प्रविशति। (लङ्लकारे)
- (ङ) तौ चित्रम् अपश्यताम्। (लृट्लकारे)

6. समुचितपदैः रिक्तस्थानानि पूरयत। (उचित पदों से रिक्त स्थानों की पूर्ति कीजिए।)

	एकवचनम्	द्विवचनम्	बहुवचनम्
(क)	अपठत्
(ख)	अगच्छताम्
(ग)	अपश्यन्
(घ)	आसीत्
(ङ)	अनमताम्

DRAWING

1. Fill colouring page no 24 to 27 and page no 34,35,50,51
2. Page no 29 to32 and 49 draw and shading in you are drawing copy
3. Do the craft work from the given link:-

Class. Thinkers

1. <https://pin.it/3UjhVOBfS>

Class achievers

1. <https://pin.it/7Q0OrjLd6>

G.K

- 1.What major international event took place in January 2024?

- 2.Which country announced a breakthrough in renewable energy technology in February 2024?

- 3.Who won the Nobel Peace Prize in February 2024?

- 4.Which country faced political unrest and protests in March 2024?

- 5.What new scientific discovery was announced in March 2024?

- 6.Which city hosted the G20 summit in April 2024?

- 7.What economic milestone did a certain country reach in April 2024?

- 8.Which famous musician passed away in April 2024, sparking worldwide mourning?

- 9.Which company launched a groundbreaking new product in May 2024?

10. What environmental disaster occurred in May 2024?

11. Who won the presidential election in a major country in January 2024?

12. What new law was passed by a country's government in February 2024?

13. Which sports event concluded in March 2024, with a surprising winner?

14. What breakthrough in medical research was announced in April 2024?

15. Which country experienced a natural disaster in January 2024, leading to international aid efforts?

16. What diplomatic agreement was reached between two long-standing adversaries in February 2024?

17. Which celebrity made headlines for their philanthropic efforts in March 2024?

18. What controversial decision did a major corporation make in April 2024?

19. Which global summit was postponed due to security concerns in May 2024?

20. What cultural event garnered attention worldwide in January 2024?
