

# GLOBAL NAV JEEWAN SECONDARY SCHOOL

## 5th Grade Summer Vacation 2024-25





# Happy Holidays



*Dear Students,*

✿ Eat healthy food and drink lots of water during summer.

✿ Get up early in the morning. Do exercise yoga and stay healthy and fit .

✿ As much as possible try to Converse in English with your friends.

✿ Help your mother in household work.

✿ Read favourite book and comic.

✿ Inculcate good manners-4 magic words  
"Please ,Thank you, Excuse me, Sorry"

✿ **Collect books from the School Library , read a story and write in your assignment copy.**





## **हिंदी**

- 1 15 सुलेख लिखो।
- 2 1,2,3 पाठ के शब्दार्थ लिखो और वाक्य बनाओ।
- 3 पेड़ हमें बहुत कुछ देते हैं , हमें पेड़ों को क्या देना चाहिए? 50 शब्दों में लिखो।
- 4 विभिन्न देशों की वेशभूषा पहने व्यक्तियों के चित्र इकट्ठे कीजिए और प्रोजेक्ट फाइल में लगाओ ।
- 5 भारत में उपस्थित किसी एक ऐतिहासिक स्थल का चित्र सहित व्याख्या करो।
- 6 पर्यावरण संरक्षण के प्रति जागरूक करने वाला एक पोस्टर A3 शीट पर बनाकर स्लोगन लिखिए।
- 7 कक्षा में कराया गया सभी कार्य को याद करें और अभ्यास करें।

## **ENGLISH**

- 1-Write 15 writing in your assignment notebook.
- 2-Write the word meaning of lesson 1,2 & Poem (I keep six honest men) and make one sentence each.
- 3-Learn & Revise lesson 1,2,& Poem(I keep six honest men) & grammar lesson 1 to 7 thoroughly.
- 4-Learn paragraph, Story & application done in the class.
- 5-Collect information about two of the following Personalities (Activity file)
  - i) B. R. Ambedakar
  - ii) Dr. APJ Abdul Kalaam
- 6-Make an activity on parts of speech on A 4 sheet (Roll no 1 to 8)
- 7-Design and make a one greeting card for the following occasions:
  - i) Birthday of your friend.
  - ii) Invitation card for your birthday party.
  - iii) Wedding anniversary of your parents.
  - iv) Best wishes to your sister for her exam.And At least four lines message for each.

## **SOCIAL SCIENCE**

**Do in assignment notebook**

**Learn and write lesson-1 ,7 defines and question answers, back exercise.**

**Read lesson-2 and 4**

**Do practice diagram given in lesson -7**

**Make a beautiful poster of Fundamental Rights on A4 size sheet(Roll no 16to24)**

**Make a chart on our fundamental duties along with related pictures on A4 size sheet.**

**paste pictures of iron tools in your scrap book and write five lines about them.**



## **Maths**

Do in the assignment notebook

- 6 sums of addition (Ex 4.1)
- 6 sums of subtraction (Ex 4.2)
- 6 sums of multiplication (Ex 4.3)
- 6 sums of Division (Ex 4.4)

Project work

**MATH-INARY (The Math Dictionary)** Collection of at least 20 Mathematical Terms and arranged in alphabetical order.

**SDG 12—Responsible Consumption and Production**

Our planet has provided us with an abundance of natural resources, but we have not utilized them with responsibility and currently consumed far beyond what our planet can provide. Control on the population growth is the only solution to use and produce the resources in a sustainable manner that will reverse the harm that we have inflicted on the planet. Study (collect the data) the population of the ten most populated countries of the world as in year 2024 and answer the following questions:

- 1) Write the population of the first five countries in the ascending and descending order for their population.
- 2) Write in words the population of first five less populated countries in both Indian And International System

## **Science**

1. Learn and write definitions and fillup of Chaptre- 1,2 in assignment copy.
2. Do APTITUDE TEST 1 worksheet in assignment Copy.
3. Learn and write one word answer from Part-D (page no. 33)
4. Search the Yoga Asanas for a healthy heart also paste the picture and write a few benefits in the Project File.
5. Paste the picture of joints and write their names in Project File.
6. Collect all information and make a chart on Carbohydrates, Proteins, Fats, Vitamins and Minerals including its source, disease caused by deficiency. ( Roll No. 15-20)
7. Make a Skeleton System post and label it on an A-4 Size sheet ( For All Students)

## **DRAWING**

1. Make fish with waste CD and paste glitter on the CD. Paste eye on the face (pg no 35)
2. Make a mask of different animals with thermocol plate ( pg no.32)
3. Make a beautiful wall hanging with waste material.
4. Make a book mark with paper.
5. Draw a beautiful scenery with crayons.

Arrange Roll no from

1-5 (English)

5-10(Hindi)

11-15(Maths)

15-20(science)

20-27(SST)



## **French**

1. Make an album on French food, monuments, fashion etc
2. revise all April and may syllabus

## **संस्कृत**

**कार्य पत्रिका - 1**

**भरकर अपनी असाइनमेंट कॉपी कॉपी में चिपकाए।**

## **Computer**

**Complete the worksheets.**

## **G.k**

**Fill the worksheets and paste in an assignment copy.**



## Hindi Worksheet



### वर्ण-विच्छेद (varn-vichhed)

निम्नलिखित शब्दों का वर्ण - विच्छेद कीजिए :

१) सुबह = स + उ + ब + ह

२) ताजमहल = .....

३) धोती = .....

४) कीमत = .....

५) घड़ी = .....

६) किताब = .....

७) पैसा = .....

८) सावधान = .....

९) मैदान = .....

१०) गुड़िया = .....



## संकल्प | 08

3. वाक्यों के सामने सही (✓) और गलत (×) का निशान लगाइए।

- क. भारत में केवल हिन्दी बोली जाती है। ( )
- ख. भाषा के बिना भी हम अपने विचार प्रकट कर सकते हैं। ( )
- ग. सार्थक शब्दों का समूह वर्णमाला कहलाता है। ( )
- घ. हम अपने विचारों को केवल बोलकर ही प्रकट कर सकते हैं। ( )
- ङ. हिन्दी हमारी राष्ट्र भाषा है। ( )

4. निम्नलिखित भाषाओं का उनकी लिपियों से सही मिलान कीजिए।

हिन्दी	फ़ारसी
पंजाबी	रोमन
अंग्रेजी	देवनागरी
उर्दू	गुरुमुखी
संस्कृत	देवनागरी

5. भारत के निम्न राज्यों में बोली जाने वाली भाषाओं का नाम लिखिए।

महाराष्ट्र	राजस्थान
पंजाब	आन्ध्र प्रदेश
गोआ	उड़ीसा

6. प्रत्येक के सामने लिखिए कि वह भाषा का कौन सा रूप है।

- क. समाचार पत्र .....
- ख. टेलीफ़ोन पर बातचीत .....
- ग. पुस्तकें .....
- घ. दूरदर्शन से समाचार .....
- ङ. सी-डी रॉम (CD-ROM) .....
- च. फ़ैक्स .....
- छ. ऑडियो कैसेट .....
- ज. कम्प्यूटर का प्रिंट-आउट .....
- झ. नेताजी का भाषण .....



- निम्नलिखित भाषाओं की लिपि के नाम लिखिए-  
 हिंदी ..... पंजाबी ..... अंग्रेजी .....
- ह्रस्व स्वर कितने हैं ? लिखिए-  
 .....
- निम्नलिखित द्वित्व व्यंजनों से दो-दो शब्द बनाइए-  
 न ..... क .....  
 ल ..... प .....
- दिए गए शब्दों में 'र' का सही रूप लगाकर लिखिए-  
 पंचीन ..... राष्ट्र ..... भर्म .....
- संघि कीजिए-  
 क. महा + उत्सव = ..... ख. सदा + एव = .....  
 ग. सु + आगत = ..... घ. देव + इंद्र = .....  
 ङ. सत् + जन = ..... च. सु + आगत = .....  
 छ. मनः + ज = ..... ज. प्रधान + आचार्य = .....
- निम्नलिखित तत्सम शब्दों के तद्भव रूप लिखिए-  

तत्सम	तद्भव	तत्सम	तद्भव
दुग्ध	.....	सत्य	.....
आम्र	.....	धृत	.....
दंत	.....	अर्थ	.....
- निम्नलिखित वाक्यों में रेखांकित शब्दों के संज्ञा-भेद लिखिए-  
 क. हिमालय उत्तर दिशा में स्थित है। .....  
 ख. माँ सब्जी लाने गई है। .....  
 ग. हम लोग शहर में रहते हैं। .....  
 घ. उनमें गहरी मित्रता थी। .....  
 ङ. बचपन के दिन हमेशा याद आते हैं। .....  
 ज. सरदार पटेल भारत के प्रथम गृहमंत्री थे। .....





## Simple Subject and Simple Predicate

Every complete sentence must have a subject and a predicate. The subject tells what the sentence is about. The predicate tells something about the subject. A simple subject is the subject without any descriptive words. A simple predicate is the verb in the predicate.

Underline the simple subject and circle the simple predicate in each sentence below.

**Example:** My mother read a book.

1. The teacher graded the homework papers.
2. John drove the car to the store.
3. We liked the last play of the game.
4. They were singing in the park.
5. On Tuesday the happy children watched a movie.
6. The scout troop met in the morning.
7. The pack of dogs ran freely in the street.
8. The sound of the bell is ringing in my ears.
9. Swimming is my favorite sport.
10. Lance and Phyllis quickly walked across the street.



English \_\_\_\_\_

Date : \_\_\_\_\_

Complete the short conversations using the words in the box:

1

**chef - Where - your - good**

**Albert:** What does ..... sister do?

**Lobiaz:** She is a ..... at a restaurant.

**Albert:** Great! That means she is a ..... cook.

**Lobiaz:** Yes of course.

**Albert:** ..... does she work ?

**Lobiaz:** She works at an Italian restaurant.

2

**does - like - is - How old**

**Suzan:** What is your dad ..... ?

**Jena:** He ..... funny. He's friendly.

**Suzan:** What ..... he look like?

**Jena:** He's tall and thin.

**Suzan:** ..... is he?

**Jena:** He's 40 years old.

Copyright © 2020 by : <sup>1</sup>FB group ( worksheets Pdf )

Fill in the blanks with words at the bottom of the page. Enter in the best possible answer for each collective noun.

English

- |                       |                          |
|-----------------------|--------------------------|
| 1. A _____ of birds   | 11. A _____ of grapes    |
| 2. A _____ of ships   | 12. A _____ of lions     |
| 3. A _____ of cattle  | 13. A _____ of rice      |
| 4. A _____ of wolves  | 14. A _____ of oysters   |
| 5. A _____ of bees    | 15. A _____ of musicians |
| 6. An _____ of ants   | 16. A _____ of geese     |
| 7. A _____ of hay     | 17. A _____ of drawers   |
| 8. A _____ of fish    | 18. A _____ of singers   |
| 9. A _____ of cards   | 19. A _____ of mountains |
| 10. A _____ of papers | 20. A _____ of trees     |

army chest range bunch flock fleet band  
herd deck forest pack bale bowl swarm  
pride bed stack school gaggle choir

## Rearrange Jumbled Sentence

1. is / my / name / John.

2. in / she / the / park / likes / to / walk.

3. English / I / learning / am.

4. always / late / he / is / for / class.

5. ice cream / I / love / eating.

6. the / she / morning / in / yoga / does.

7. to / want / travel / I / the / world / around.

8. happy / my / makes / music / me.

9. for / the / party / is / she / getting / ready.

10. hot / drink / I / prefer / tea.

11. ride / a / bike / enjoys / he.

12. the / beach / loves / she / at / to / swim.



## Parts of speech

Select the correct answer for the underlined word.

- 1.) The happy bikers stopped for lunch and a rest.  
a. Noun b. Adjective c. Verb d. Adverb e. Preposition f. Pronoun
- 2.) He brought it today for show and tell.  
a. Noun b. Adjective c. Verb d. Adverb e. Preposition f. Pronoun
- 3.) Alan eats a lot of food, but he eats very slowly.  
a. Noun b. Adjective c. Verb d. Adverb e. Preposition f. Pronoun
- 4.) The moon shines brightly tonight in the dark sky.  
a. Noun b. Adjective c. Verb d. Adverb e. Preposition f. Pronoun
- 5.) The little girls like to watch the animals in the forest.  
a. Noun b. Adjective c. Verb d. Adverb e. Preposition f. Pronoun
- 6.) They teach third grade at Happyville Elementary School.  
a. Noun b. Adjective c. Verb d. Adverb e. Preposition f. Pronoun
- 7.) The old, tired musician sang loudly at the concert tonight.  
a. Noun b. Adjective c. Verb d. Adverb e. Preposition f. Pronoun
- 8.) The four teenagers mowed the front yard and the back yard for just \$2.  
a. Noun b. Adjective c. Verb d. Adverb e. Preposition f. Pronoun
- 9.) The little boy reads a big book very slowly to his teacher.  
a. Noun b. Adjective c. Verb d. Adverb e. Preposition f. Pronoun
- 10.) I walked around the large park extremely slowly.  
a. Noun b. Adjective c. Verb d. Adverb e. Preposition f. Pronoun





Name ..... Class ..... Sec. .... Roll No. ....

**A. Write the numerals and insert commas.**

1. Eighty crore thirty-six lakh five hundred twenty-one .....
2. Seventy-five crore two lakh three hundred two .....
3. Forty crore forty-four lakh four hundred forty-four .....
4. Three crore two lakh ninety-six .....

**B. Write the standard form.**

1.  $90000000 + 1000000 + 200000 + 70000 + 100 + 5$  .....
2.  $80000000 + 500000 + 70000 + 400 + 60 + 8$  .....
3.  $30000000 + 30000 + 9000 + 50 + 2$  .....
4.  $50000000 + 2000000 + 40000 + 3000 + 400 + 30 + 8$  .....

**C. Write the successor.**

- |                   |                   |
|-------------------|-------------------|
| 1. 31650829 ..... | 2. 89898989 ..... |
| 3. 76411304 ..... | 4. 93646800 ..... |
| 5. 87590909 ..... | 6. 54869999 ..... |

**D. Write the numbers in descending order.**

1. 74316210, 71436210, 74136210, 73146210  
.....
2. 96580734, 96508437, 96580374, 96085374  
.....
3. 70500017, 70501007, 75000170, 75001007  
.....
4. 68100854, 68001584, 68001458, 68010854  
.....

**L** Write the smallest 7-digit number using the digits 6, 5, 0, 1, 3 and 2. (You can repeat the digits.)  
.....

**M** Round off to the nearest 10.

- |                |                 |
|----------------|-----------------|
| 1. 89641 ..... | 2. 34813 .....  |
| 3. 24013 ..... | 4. 651124 ..... |

**N** Write the Roman numerals.

- |                   |                |
|-------------------|----------------|
| 1. CCLXVIII ..... | 2. XXXIX ..... |
| 3. LXXXVIII ..... | 4. CDLIX ..... |

**O** Write the sum of the place value and the face value of the underlined digit in International system.

- |                      |                      |
|----------------------|----------------------|
| 1. <u>6</u> 8103133  | 2. 78 <u>4</u> 65131 |
| <input type="text"/> | <input type="text"/> |
| 3. <u>3</u> 2468301  | 4. 544 <u>8</u> 2130 |
| <input type="text"/> | <input type="text"/> |

**P** The given table shows the population of various countries in different years.

Countries	2018	2019	2020	2021
A	65113243	65113423	65313243	65314323
B	63408132	63408321	64308132	64308321
C	64651813	64651381	66451813	66451831
D	63842681	63846281	68342681	68342883

Based on above information, answer these questions.

1. Arrange the population of various countries in 2019 in ascending order.  
.....
2. Arrange the population of various countries in 2021 in descending order.  
.....
3. Find the sum of the place values of population of Country C in all four years.

E. Write the numbers in ascending order

1. 567890, 5467089, 5476980, 5476089 .....
2. 35672416, 35671246, 35761462, 37462146 .....
3. 15267302, 15276302, 15726320, 15762320 .....
4. 91726095, 91762095, 97126905, 97126950 .....

F. Write  $>$ ,  $<$  or  $=$ .

1. 34136512 ..... 34135612
2. 89611324 ..... 89611342
3. 40816113 ..... 48016113
4. 18003461 ..... 18004361

G. Write the greatest 8-digit number using the digits 1, 0, 4, 8, 9 and 6. (You can repeat the digits.)

.....

H. Round of the following numbers to the nearest 100.

1. 284613 .....
2. 800132 .....
3. 686908 .....
4. 784153 .....

I. Round off the following numbers to the nearest 1000.

1. 632538 .....
2. 9916000 .....
3. 435693 .....
4. 215462 .....

J. Write the Hindu-Arabic numbers for the following.

1. 427 .....
2. 384 .....
3. 105 .....
4. 248 .....

K. Write the sum of the place value and the face value of the underlined digit in Indian System.

1. 81136512

2. 24861342

3. 40936395

4. 38611371



Use the words from the box to complete each statement.

## Social Science

Ardipithecus	Homo habilis	Homo Sapiens	Africa	Anthropology
Paleontologists	Lucy	Paleontology	Homo erectus	Australopithecus

1. Female skeleton found in the desert of Afar in Ethiopia in 1794: \_\_\_\_\_.
2. \_\_\_\_\_: was probably the first early human species to form part of a hunter-gathered society. First species able to control the fire and to eat meat.
3. Most fossils of early humans have been found in \_\_\_\_\_.
4. The \_\_\_\_\_ is the oldest hominid species currently known.
5. \_\_\_\_\_ are the scientist that study fossils.
6. \_\_\_\_\_ had larger brains and smaller teeth than Australopithecus, and they made tools.
7. \_\_\_\_\_ is the study of humans.
8. \_\_\_\_\_ means man who knows or who has the ability to learn.
9. \_\_\_\_\_ had human and ape-like characteristics. They are separated into two branches: Australopithecus robustus and Australopithecus bosei.
10. \_\_\_\_\_ is the study of ancient life forms.

## Social Science



7<sup>th</sup> SOCIAL STUDIES - WORKSHEETS  
by Rambabu Sunkari

An Introduction to Indian  
Constitution

WORK SHEET






An Introduction to Indian Constitution

Match the following.

### Group- A

1. Dr.B.R. Ambedkar
2. Moti Lal Nehru
3. Mahatma Gandhiji
4. Dr. Babu Rajendra Prasad
5. Jawahar Lal Nehru

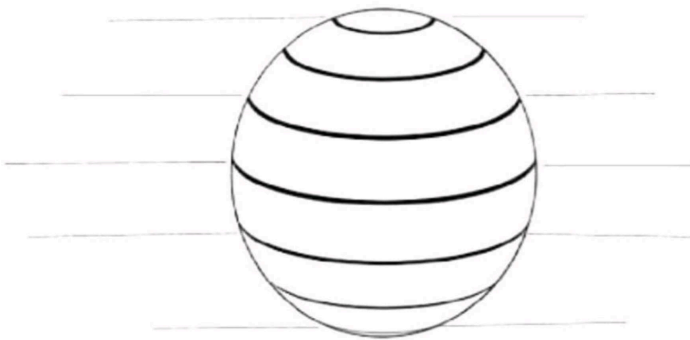
### Group- B

- a) 
- b) 
- c) 
- d) 
- e) 

2. Label the following diagram **Social Science**

Lines of latitude

Degree-direction



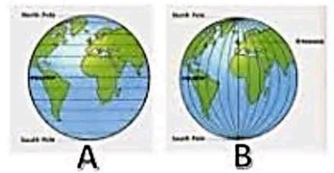
3. Fill in the blanks.

- The longitudes run from \_\_\_\_\_ to \_\_\_\_\_.
- There are \_\_\_\_\_ important lines of latitude.
- The  $0^\circ$  latitude is known as \_\_\_\_\_.
- The earth spins on an imaginary line, known as the \_\_\_\_\_ of the Earth.
- The Equator runs through the continent of \_\_\_\_\_.

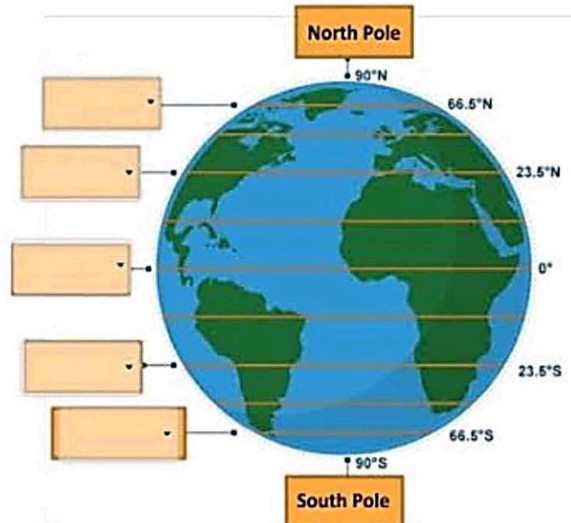
**CLASSWORK 4.1C: LOCATING PLACES ON A GLOBE**

(Refer to textbook pg. 70-72 & pg. 74 and video link <https://www.youtube.com/watch?v=MSA88mmFuyE>)

- Latitudes are also known as \_\_\_\_\_ of \_\_\_\_\_ Which diagram, A or B? \_\_\_\_\_
- Lines that run from north to south on earth are called Meridians of \_\_\_\_\_. It intersects at the \_\_\_\_\_ and \_\_\_\_\_ Pole. Which diagram, A or B? \_\_\_\_\_



- Label the main lines of latitude in the figure below:

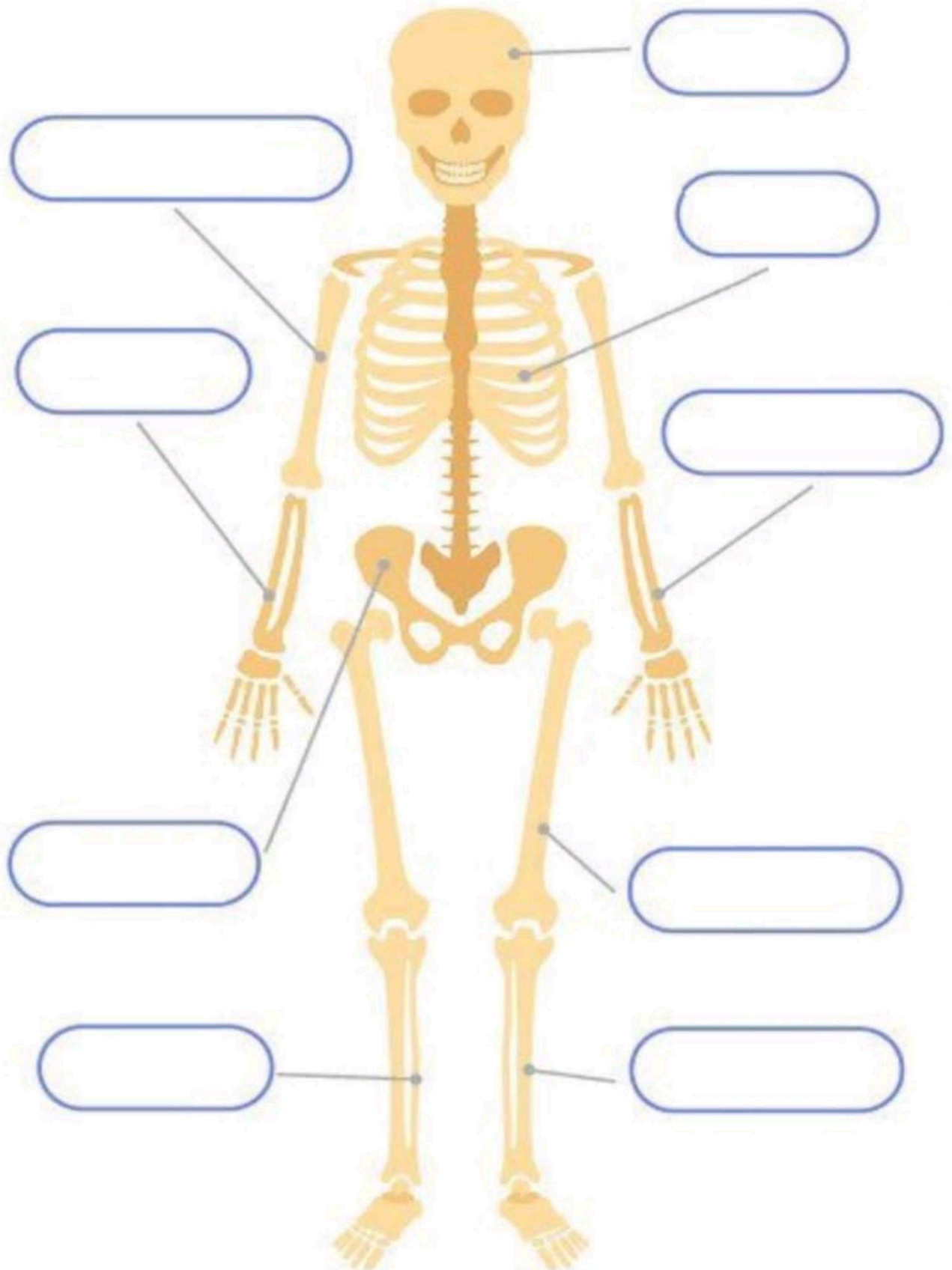


- Complete the table below:

MAIN LINE OF LATITUDE	Tropic of Cancer	_____	Equator	_____	Antarctic Circle
LATITUDE LOCATION	_____	$66.5^\circ\text{N}$	$0^\circ$	$23.5^\circ\text{S}$	_____



# THE SKELETAL SYSTEM



**Q.1: Give two examples of food that contain following nutrients :**

VITAMINS a) \_\_\_\_\_  
b) \_\_\_\_\_

FATS a) \_\_\_\_\_  
b) \_\_\_\_\_

MINERALS a) \_\_\_\_\_  
b) \_\_\_\_\_

PROTEINS a) \_\_\_\_\_  
b) \_\_\_\_\_

Name: \_\_\_\_\_

Grade: V

## Food And Health



1. Choose the correct answer.

A. Which of the following food is rich in carbohydrates.

a. butter b. egg c. rice d. curd

B. Food rich in vitamin and minerals is called.

a. protective food b. digestive food c. protein d. obesity

C. Exercise and good food help in building a strong and healthy.

a. teeth b. body c. sleep d. posture



2. Write (P) for the foods which we get from plants and (A) for the food items which we get from animals.



\_\_\_\_\_



\_\_\_\_\_



\_\_\_\_\_



\_\_\_\_\_



\_\_\_\_\_



\_\_\_\_\_



संस्कृत-वर्णमाला

नाम ..... कक्षा ..... दिनांक .....

1. निम्न संयुक्त व्यंजनों से बने शब्दों के तीन-तीन उदाहरण दीजिए।

- (क) क्ष .....  
 (ख) त्र .....  
 (ग) ज्ञ .....  
 (घ) श्र .....

2. स्वरों एवं व्यंजनों को अलग-अलग करके लिखिए।

अ, प, ऐ, ल, ऊ, र, ए, म्, त्, ई, उ, च्

- (क) स्वर — .....  
 (ख) व्यंजन — .....

3. निम्नलिखित प्रश्नों के उत्तर एक शब्द में दीजिए।

- (क) संस्कृत वर्णमाला में कुल कितने वर्ण होते हैं? .....  
 (ख) अनुस्वार और विसर्ग क्या कहलाते हैं? .....  
 (ग) भाषा की सबसे छोटी इकाई को क्या कहते हैं? .....  
 (घ) संस्कृत भाषा में किन स्वरों का प्रयोग अब नहीं होता? .....  
 (ङ) 'विसर्ग' का क्या चिह्न होता है? .....

4. वर्ण-संयोग करके शब्द लिखिए।

- (क) च् + अ + क् + र् + अ + म् = .....  
 (ख) म् + अ + ह् + इ + ल् + आ = .....  
 (ग) अ + ध् + य् + आ + प् + इ + क् + आ = .....

(घ) व् + इ + द् + य् + आ  
5. निम्नलिखित शब्दों का वर्ण-विच्छेद कीजिए।

(क) कमलम्

(ख) आज्ञा

(ग) अक्षरः

(घ) उद्यमः

6. व्यंजनों के साथ स्वरों को मिलाकर लिखिए।

(क) प् + र् + अ =

(ख) त् + र् + अ =

(ग) क् + ष् + अ =

(घ) द् + य् + अ =

(ङ) श् + र् + अ =

(च) ज् + ज् + अ =

(छ) द् + य् + अ =

(ज) द् + ध् + अ =

उचित वर्णों द्वारा रिक्त स्थानों की पूर्ति कीजिए।

(क) म् + ..... + क् + ष् + इ + ..... + आ = मक्षिका

(ख) न् + ..... + त् + र् + ..... + म् = नेत्रम्

(ग) व् + ..... + क् + ..... + अः = वृक्षः

(घ) ज् + ई + व् + ..... + न् + ..... + म् = जीवनम्

(ङ) अ + ..... + ज् + आ + ..... + अ + म् = अज्ञानम्

(च) म् + ऊ + ..... + इ + ..... + आः = मूषिकाः



ਖਾਲੀ ਥਾਂ ਭਰੋ

ੳ \_\_\_\_\_ ਏ \_\_\_\_\_ ਹ \_\_\_\_\_

\_\_\_\_\_ ਖ \_\_\_\_\_ ਘ \_\_\_\_\_

ਚ \_\_\_\_\_ ਜ \_\_\_\_\_ ਵ \_\_\_\_\_









\_\_\_\_\_ ਠ \_\_\_\_\_ ਢ \_\_\_\_\_

ਤ \_\_\_\_\_ ਧ \_\_\_\_\_

ਪ \_\_\_\_\_ ਬ \_\_\_\_\_

ਯ \_\_\_\_\_ ਝ \_\_\_\_\_

ਸ਼ \_\_\_\_\_ ਜ਼ \_\_\_\_\_

ੳ	
ਅ	
ਜ	
ਹ	
ਛ	
ਸ	
ਘ	
ਕ	
ਚ	
ਗ	

**Punjabi**

Date/ਤਾਰੀਖ: \_\_\_\_\_

Name/ਨਾਮ: \_\_\_\_\_

Match the letters with their beginning sound.

ਹੇਠਾਂ ਕੁਛ ਅੱਖਰ ਦਿੱਤੇ ਗਏ ਹਨ। ਇਹਨਾਂ ਨੂੰ ਇਹਨਾਂ ਦੇ ਸਹੀ ਚਿੱਤਰ ਨਾਲ ਮਿਲਾਓ :

ੳ .

ਅ .

ੲ .

ਸ .

ਹ .



Created by Gul Bibi, www.PunjabiLibrary.com

**Easykids.in**

**Punjabi**

Date \_\_\_\_\_

ਦੇ ਅੱਖਰਾਂ ਵਾਲੇ ਸ਼ਬਦ



ਘ + ਰ = \_\_\_\_\_

ਫ + ਲ = \_\_\_\_\_

ਟ + ਬ = \_\_\_\_\_

ਬ + ਸ = \_\_\_\_\_

ਜ + ਲ = \_\_\_\_\_

ਦ + ਸ = \_\_\_\_\_

ਖ + ਤ = \_\_\_\_\_

ਕ + ਪ = \_\_\_\_\_

ਹ + ਲ = \_\_\_\_\_

ਜ + ਗ = \_\_\_\_\_

Discover a wide range of educational worksheets available at [www.easykids.in](http://www.easykids.in)  
Copyright © 2023 - EasyKids.in - All rights reserved.

[www.easykids.in](http://www.easykids.in)

[info@easykids.in](mailto:info@easykids.in)



## GK Questions For Class 5th

1. The normal boiling point of water is-
2. Which tree is known as national tree of India-
3. Who written national anthem of India-
4. What is the chemical formula of water-
5. Who is called father of nation-
6. Who invented telephone-
7. Where is India's first nuclear center-
8. Who is lovingly called ChahCha Ji-
9. The dance form Garba is associated with which state-
10. Who was India's longest serving Prime Minister-
11. Lassi is a drink made from what dairy product-
12. Which city is known as Pink City-
13. Which planet is nearest to the sun-
14. World longest River-
15. Lightest gas is-
16. Which is deepest ocean-
17. The Indian national army was founded by- :
18. India's 14th President name is
19. Who was the first Indian woman to be honored with Bharat Ratna-
20. Australia lies between 2 oceans, name those oceans-
21. First Indian Woman to win Nobel Prize-
22. The ISRO was founded by-
23. Highest mountain peak in the world-
24. Who was the first Indian to go in space-

**Fill in the blanks with appropriate answer :**

1. How many parts does the Indian Parliament have? .....
2. What age should an Indian citizen be to acquire the right to vote?  
.....
3. Who is the head of a Municipal Corporation? .....
4. Who presents the Central 'Budget' in parliament? .....
5. What is the maximum strength of Lok Sabha? .....
6. What should be the minimum age of the candidate to  
become a member of the Lok Sabha? .....
7. Who elects the Vice Presidents of India? .....
8. Which state in India has the largest number of seats,  
in the Lok Sabha. ....
9. Name the first Chief Election Commissioner of India? .....
10. How many High Courts are there in India? .....
11. How many languages are recognised by the India  
Constitution? .....
12. What is the term of member of the Rajya Sabha? .....
13. Who appoints the Judges of Supreme Court? .....
14. A High Court Judge shall hold office till what age? .....
15. Who is the ex-officio Chairman of the Rajya Sabha? .....



### Software activity

### Computer

Drag and drop the correct name to the picture.




Internet browser    Snapchat    Instagram    Youtube  
Facebook    Powerpoint    Folder    Publisher    Excel  
Word    Recycle bin

### Practical Time

### Computer

Open Paint and draw Abacus in it.











Open Word 2016, type the name of different calculating devices and their inventors and save the file as 'Evolution of Computers'.

Calculating Device	Inventor
Analytical Engine	Charles Babbage
Leibniz Step Reckoner	Gottfried Wilhelm Leibniz
Tabulating Machine	Herman Hollerith
Pascaline Adding Machine	Blaise Pascal

# Computer

GRADE \_\_\_\_\_

Can you name the software and explain what you might use it for?


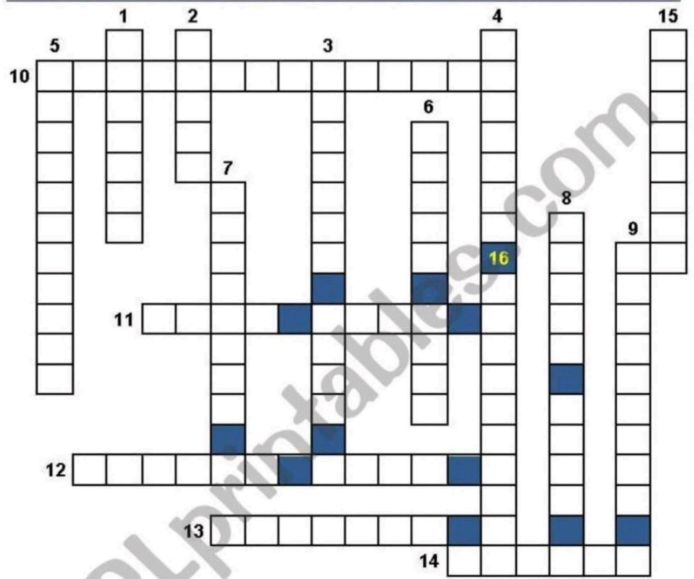
Software	Name	Used for?
		
		
		
		
		
		
		
		

Excel	Outlook	To create posters, animations.	Emailing
Serif Drawplus	Access	To create a movie	To create a slideshow
Word	Internet Explorer	To browse the internet	To write a document or letter.
Publisher	Moviemaker	Newsletters, leaflets, posters	To alter images
Photoshop	Powerpoint	Spreadsheets - calculations, graphs/charts	
		Databases, to store data about customers etc.	

# Computer



Write the name of the **devices** in the crossword below and decide if it is an **input (I)**, **output (O)**, **process (P)** or a **storage (S)** device.



1	2	3	4	5	6	7	8
---	---	---	---	---	---	---	---



9	10	11	12	13	14	15	16
---	----	----	----	----	----	----	----



