

GLOBAL NAV JEEWAN SECONDARY SCHOOL



SUMMAR VACATIONS

HOLIDAY HOMEWORK

Class- 6th



Summer Holiday



Hurray!!! The Summer Holidays are here... It's time to take a break, sit back & enjoy a few weeks on holiday! To keep the little ones engaged & be in touch with the learnings done in the class, the Summer Holiday Activities are designed with a motto of "Fun & Learn". Homework Worksheets & a bank of fun filled activities is being uploaded on our 'School Portal'.

So, parents, let them put their thinking caps & get their imagination going. Please download the Worksheets & Activities. Let us all help them be more confident & independent...

Happy Holidays!!!



Out of difficulties grow miracles. Tough time don't last.

Dear Students

The beginning of new session might not have been with pomp and show, but the spirit of teaching learning continues in the school. The summer vacations this time would not be ice creams, candies and cool pool, but time can be utilized in honing skills and interests.

It is easy to bloom, then to be a bud, but you are responsible young members of the nation and its our duty to follow rules. Here are some holiday activities designed for creative utilization of time. Give a flight to your imagination and spend time purposely.

Some points to be remember

- ❖ Drink plenty of juice and water to avoid dehydration.
- ❖ Make hand washing and hygiene a part of your routine.
- ❖ Holiday Homework is a part of subject enrichment and will be assessed on the basis of creativity and efforts of the students.
- ❖ It's the perfect time to enhance your speaking skills and vocabulary by conversing in English with your family and siblings.
- ❖ Reading is essential for those who seek to rise above the ordinary. Spend your quality time reading purposeful books.
- ❖ A beautiful handwriting makes a good impression. Practice one page of English and Hindi handwriting daily.
- ❖ Schedule your time for activities so that there is no piling up for the last moment.
- ❖ Holiday homework should be your authentic creative work.

Maths

Revise ch- 1,2 & 4

Q. Write any 4 mobile numbers of your family members (like Father, mother, grandfather, grand mother, brother, sister etc.) Insert commas and write mobile numbers. According to Indian aswell as international system (in assignment copy)

Q. Write your admission number. Write it nearest 10, 100 and 1000(in activity file).

Section A

1. Counting numbers are called_____.]
a) Whole numbers
c) Natural numbers
b) Integers
d) None of these
2. Rahul deposits ₹ 125000 in his savings bank account. Later, he withdraws ₹ 35125 from it. How much money was left in his account?
a) ₹ 68125
c) ₹ 89875
b) ₹ 98975
d) ₹ 75125
3. The sum of two whole numbers is always:
a) a whole number
c) a natural number
b) an odd number
d) an even number
4. The sum of a natural number with a whole number is always:
a) an even number
c) 0
b) a natural number
d) odd number
5. Which one of the following is the smallest whole number?
a) 0
c) 1
b) 2
d) -2
6. The product of the place values of two 2's in 428721 is
a) 400000
c) 4
b) 40000000
d) 40000
7. The predecessor of which two-digit number has a single-digit
a) 21
c) 10
b) None of these
d) 11
8. Largest number formed by digits 2, 4, 0, 3, 6, 9 is
a) None of these
c) 964230
b) 203469
d) 964320
9. Write the successor of 1996?
a) 1998
c) 1997
b) 1994
d) 1995

10. The greatest number which always divides the product of the predecessor and successor of an odd natural number other than 1, is

- a) 16
- b) 8
- c) 4
- d) 6

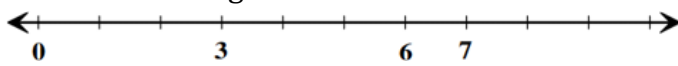
SECTION B

11. **Assertion (A):** Starting from 0, moving 4 units at a time to the right. Then we make such 5 moves. Then we will be at 20.

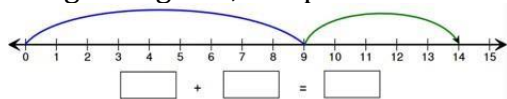
12. How many whole numbers are there between 381 and 401?

13. A mobile number consists of ten digits. The first four digits of the number are 9, 9, 8, and 7. The last three digits are 3, 5, and 5. The remaining digits are distinct and make the mobile number, the greatest possible number. What are these digits?

14. Write the missing numerals below the number line.



15. Using the figures, complete the addition sentence and find the sum.



Match the following

Column A	Column B
1. Smallest whole number	a. 3
2. Smallest natural number	b. 0
3. Smallest even number	c. 1
4. Smallest odd prime number	d. 2

Find the greatest 4- digit number which is exactly divisible by 88.

Estimate each of the following by rounding off each number to the

nearest tens: i. 11963 - 9369

ii. 76877 - 7783

iii. 10732 - 4354

iv. 78203 - 16407

Find the least number which should be added to 10000 so that the sum is exactly divisible by 237.

Find 4×2 using the number line.

In each of the following pairs of numbers, state which whole number is on the left of the other number on the number line. Also write them with the appropriate sign ($>$, $<$) between them.

(a) 530, 503

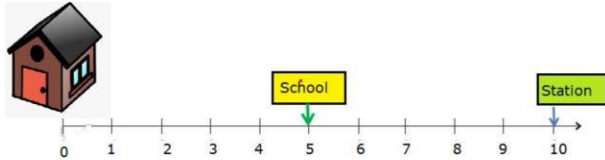
(b) 370, 307

Write the predecessor of :a. 10000

b. 308090

c. 9654321

Read the text carefully and answer the questions:



As per shown in the above picture Naresh's House is at 0 position in number line , His school is at position 5 and Station is at position 10.

(i) What is the distance between Naresh's House and the school?

a) 5

b) 10

c) 7

d) 8

(ii) What is the distance between School and the station?

a) 15

b) 5

c) 10

d) 7

(iii) Which number is successor of the position of the school?

a) 5

b) 4

c) 10

d) 6

(iv) If you add 1 to a whole number, we get its.

ENGLISH

Revise all syllabus which has done in the class.

Read newspaper daily and write the 20 headlines on A4 size sheets.

Make your own dictionary

Do a paragraph "How you spend your holiday" on A4 size

Do Conversation with your family member and friends. Make a short clip and send it on WhatsApp (minimum 3 conversation clip)

CLASS ROOM CONVERSATION

What page are we on?

1. I am ready. May I start it?
2. May I go out?
3. May I answer the question?
4. May I switch off the lights?
5. Teacher, please can you repeat again?
6. May I open the window?
7. May we pack our things now?
8. May I join the class/group?
9. What is the homework?
10. Do we have to write this down?
11. Sorry, for being late.
12. May I open / close the window?
13. Can I come in?
14. Can you explain it once more, please?
15. May I go out please?
16. Is this right?
17. Is this correct?
18. I am sorry. I did not hear.
19. Can you speak louder, please?
20. Which book?
21. Can you explain that again?
22. When is the exam?
23. When is the homework for?
24. I have done this.
25. May I go to the toilet?
26. Can you help me, please?

CONVERSATION AT HOME

1. I love you, mummy.
2. Could you bring me a glass of water?
3. I will get up early in the morning.
5. She is my cousin sister.
6. Where is a father?
7. They are my friends.
8. I am going to the playground.
9. It is very hot today. Isn't it?
10. I want more money.
11. I am sick.
12. I remember everything.
13. I just made it
14. I love to play video games.
15. I apologize.
16. Thank you mummy, bye.

Make a Sentence

are at we I have **FIND** these you don't THAT
he see can wear MAKE she
in look between ON they is
behind a under elephant her
the shirt be this careful
hat it jeans many shoes an
his how trousers
AND chair you dogs

How many sentences can you make?

ADJECTIVES WORD SEARCH

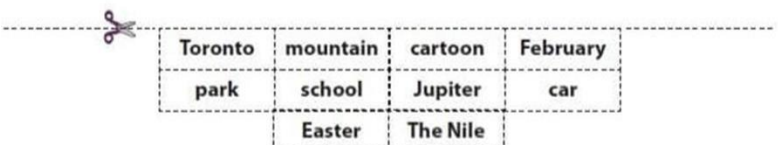
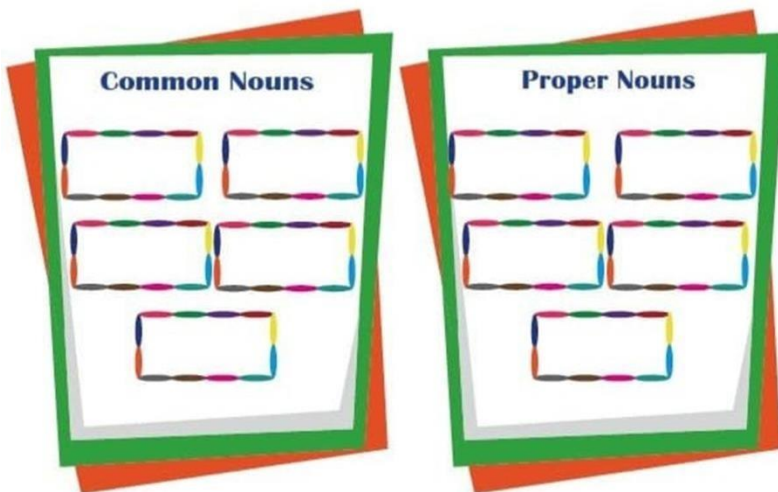
Find the adjectives in the grid below.



- | | | | |
|-------|-----------|-------|--------|
| big | beautiful | young | blue |
| small | handsome | large | orange |
| tall | pretty | tiny | black |
| short | cute | fat | white |
| long | old | thin | |

Common Nouns and Proper Nouns

Cut out the noun cards. Sort them as common and proper nouns, and glue them in the appropriate boxes.





Pronoun

everyone	who	whom
whose	everything	himself
both	yourself	his
him	whoever	your
I	something	either



Use the correct pronouns from the box to complete the sentences.

- _____ is that girl?
- Don't believe _____ you hear.
- With _____ am _____ speaking?
- He repaired _____ car by _____.
- _____ loves her.
- _____ car is that?
- I don't want _____ of them.
- Make _____ at home.
- I smell _____ burning!
- Give this pen to _____ wants it.
- Hold the box with _____ hands.
- How was _____ day?
- She gave it to _____.

Daily Routines

SENTENCE JUMBLE

Put the words in the correct order to make a sentence.



(o'clock / seven / up / wake / I / at / .)



(thirty / I / breakfast / have / at / seven / .)



(eight / teeth / my / brush / I / at / .)



(shower / What / you / do / time / take / a / ?)



(get / dressed / I / at / fifteen / eight / .)



(time / What / school / you / do / go / to / ?)



(dinner / I / eat / seven / at / pm / .)



(go / sleep / to / I / at / eleven / o'clock / .)

Name: _____

Date: _____

Grade 6 Reading Comprehension Worksheet

The Straw, the Coal, and the Bean

Read the story. Then answer the questions.

There lived in a certain village a poor old woman who had collected a mess of beans, and was going to cook them. So she made a fire on her hearth, and, in order to make it burn better, she put in a handful of straw. When the beans began to bubble in the pot, one of them fell out and lay, never noticed, near a straw which was already there; soon a red-hot coal jumped out of the fire and joined the pair. The straw began first, and said, "Dear friends, how do you come here?" The coal answered, "I jumped out of the fire by great good luck. I should have been burned to ashes." The bean said, "I too have come out of it with a whole skin. I should have been cooked like my comrades." "Luckily I managed to slip through her fingers." Straw said. "What had we better do now?" said the coal. "I think," answered the bean, "that as we have been lucky as to escape with our lives, we will go together into foreign lands." The proposal pleased the two others, and they started on their travels. Soon they came to a little brook, and as there was no bridge. The straw was struck with a good idea, and said, "I will lay myself across, so that you can go over me as if I were a bridge!" So the straw stretched him from one bank to the other, and the coal, quickly trotted up to go over the newly-made bridge. When, however, she reached the middle, and heard the water rushing past beneath her, she was stopped, and could get no farther. So the straw began to get burnt, broke in two pieces, and fell in the brook, and the coal slipped down, hissing as she touched the water. The bean, who had prudently remained behind on the bank, went on laughing so excessively that she burst and now would she certainly have been undone forever, if a tailor on his travels had not by good luck stopped to rest himself by the brook. He took out needle and thread and stitched her together again. The bean thanked him, but as he had sewn her up with black stitches, all beans since then have a black seam.

Answer each question.

1. Where were the straw, the coal and the bean?
2. How the coal, the bean and the straw did save their lives?
3. What plan have they made for themselves?
4. What did the straw and the coal did to cross the brook?
5. What did happen with the bean?
6. Who did help the bean and how?

Aristotle

Greek Philosopher

Read the passage. Then answer the questions.

Aristotle lived many years ago. He was born in a Greek colony about 350 years before the birth of Christ (B.C.) His father, Nichomachus, was the physician for the king of Macedonia. Unfortunately Nichomachus died when Aristotle was quite young. When he was 17 years old he was sent to Athens to study. Athens was a center of learning and he joined the Academy and studied for twenty years under Plato who was the foremost philosopher and teacher of that time. When Plato died Aristotle left Athens and went to Mysia where he taught for three years in the king's court and married the king's daughter Pythias. They had a daughter and Pythias died when she was a young woman. Some writers claim that Philip, king of Macedonia, invited him to come and teach his son Alexander who was 13 years old at the time. He tutored him for five years. This same Alexander would later go on to conquer the then-known world. He returned to Athens. Aristotle set up his own school, the Lyceum, he would teach there for 13 years. The school he started continued for more than two hundred years. Aristotle was a genius. He studied many different subjects; science, plants, animals, the human body, weather, the earth, the heavens, politics, government, ethics and philosophy. He taught moderation, urging his students to follow the middle road between extremes. He defined virtue as the disposition of the soul that promotes human flourishing. Aristotle thought common men of virtue were capable of governing themselves. He died soon afterward in 322 B.C. at the age of 62.



Answer each question.

1. What do you know about the early life of Aristotle?
2. What did he do in Mysia?
3. What did some writers claim about Aristotle?
4. Where did Aristotle set up his school?
5. How many subjects did Aristotle study?
6. What were the teachings of Aristotle and when did he die?

SCIENCE

Physics

All Holiday homework you have to write in Science practical file.

- Q1) with help of your family members you have to measure Length of Bed, Room ,Bike or scooter ,car , Balcony ,Door , window ,key ,Notebook and write Down these value in your practical file
- Q2) To Demonstrate that matter has mass.
- Q3) Learn and write All Q/Ans and important Topics of ch 1 in your holiday homework
- Q4) To observe the shape, volume and compressibility of solid, liquid and gas state.
- Q5) To observe the characteristics of different matter and classify them into solids, liquids and gases.

Biology

- Q1) Visit any park with your family members and Discuss about **kinds of Leaves, Function of Leaf and structure of Leaf**. And write Down your experience in your Holiday homework copy
- Q2) Do activity in practical file
To show that leaf prepares starch during photosynthesis
- Q3) To study that water vapour is released during transpiration
- Q4) Learn and write All Q/Ans and important Topics of ch 1 in your holiday homework
- Q5) To draw different types of leaves and study their structure and types of venation.

Chemistry

- Q1) Draw a Table and write Down chemicals use in Talcum powder, cream, Antiperspirant and Lipstick
- Q2) Draw a Table and write some compounds name and their constituent elements
- Q3) Learn and write All Q/Ans and important Topics of ch 1 in your holiday homework
- Q4) In Holiday homework copy you have to write Name and symbol of first 20 elements along with their atomic number.
- Q5) In Holiday homework copy write About 10 Indian Male and Female scientists and their inventions and Their Biography.

Print out this worksheet and complete it

Name: _____ Date: _____

Label the Parts of a Simple Leaf

Word Box

Leaf base	Axil	Stem
Petiole	Tip	Vein
Leaf-blade	Margin	Midrib

1. Measurement is the comparison of an unknown quantity with some _____ quantity.
2. 1 km = _____ m.
3. Standard unit of length is _____.
4. The length of a curved line can be measured using a _____.
5. Motion of a child on a swing is _____ motion.

State whether the statement is true or false





1. The choice of device used for the measurement depends on the type of measurement to be made.
2. Our senses are reliable for accurate measurement.
3. 1m = 100cm.
4. 5km = 5000cm.
5. Motion of a wheel of a cycle is random motion.

Famous Scientists' Biographies


A **Biography** is the story of someone's life.

ACTIVITY 1: Watch the VIDEO and use a dictionary or Google Translator to find new words.

ACTIVITY 2: Match the picture and the name of the scientist. Write the letter under the picture.



A	RACHAEL L. CARSON
B	LOUIS PASTEUR
C	HYPATIA
D	CHARLES DARWIN
E	ARISTOTLE



Across

- 4. Series of chemical reactions used to release energy stored in food molecules
- 8. Machine that keeps food frozen
- 10. When a food product goes bad
- 11. Yummy treat on a hot summers day

- 12. An explanation of things based on many observations

Down

- 1. Systematic approach to problem solving
- 2. Smallest units of matter
- 3. Characteristics; notable properties or features




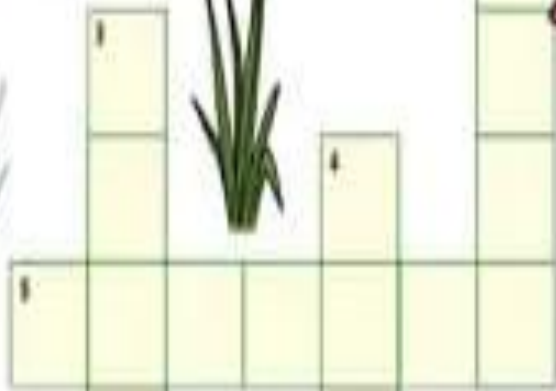

- 5. Factor tested in an experiment
- 6. Cubes of water that has frozen
- 7. What happened to Ice Cream when left at room temperature
- 9. The standard used to compare with the outcome of a test

Add title here

Directions:

Word Bank

Roots
Leaves
Pollen
Flower
Seeds
Water
Fruits
Stem
Branches



HINDI

नई आशाएँ पाठ 3 पढ़ो और शब्दार्थ याद करो तथा पाठ से दस शब्दों का वर्ण विच्छेद करो।

2. व्याकरण आलोक पाठ 4 पढ़ो तथा पाँच विलोम शब्द लिखो।

3. कार्या पत्रिका 1-2

रचनात्मक कार्य

1. संतुलित आहार में कौन सी चीज़ें सम्मिलित होती है। उन्हें चार्ट द्वारा दर्शाइए।

2. इंटरनेट और मोबाइल के इस युग में लिखने का कितना महत्व रह गया है इस पर अपने विचार लिखें।

3. वर्तमान समय में मात्र भाषा के महत्व पर प्रोजेक्ट तैयार कीजिए।

• निम्नलिखित प्रश्नों के उत्तर दीजिए-

1. राष्ट्रभाषा और मातृभाषा में क्या अंतर है ?

2. संधि के कितने भेद होते हैं ? सभी भेदों के नाम लिखिए ।

3. शब्द क्रिये आहते हैं? शब्दों को कितने वर्गों में बाँटा जाता है?

4. व्यक्तिवाचक और जातिवाचक संज्ञा में अंतर स्पष्ट कीजिए ।

5. निम्नलिखित उपयों से दो शब्द बनाइए

आ) प्रति

ब) गर।

• निर्देशानुसार प्रश्नों के उत्तर लिखिए

1. निम्नलिखित शब्दों के वर्ण विच्छेद कीजिए-

कृपालु,

अक्षर ।

2. सही गलत पहचान कर लिरिवार

मुख दुवारा उन्तरित भाषा लिखित भाषा कहलाती है।

बनावट की दृष्टि से शब्दों के गोन प्रकार होते है।

3. निम्नलिखित रिक्त स्थानों की पूर्ति कोष्ठक में दिए गए उचित शब्द से कीजिए-

जुन के महीने में बहुत होती है। गर्म, गमी)

महेश करके खेलने गया। पढ़ाई, पढ़ना)

4. निम्नलिखित शब्दों में गुलशब्द और प्रत्यय: अलग करके लिखिए

गर्दीला,

अपनत्व

5. निम्नलिखित संधि-विच्छेदों की साँध कीजिए -

परम + ईश्वर

दु + बल

- निर्देशानुसार उत्तर लिखिए -

क) निम्नलिखित शब्दों का उनके पर्यायवाची शब्दों से मिलान कीजिए-

जगल	चौर
बिजली	विधिन
कपड़ा	दामिनी
कोयल	दोस्त
युद्ध	समर
मित्र	श्याना

प्र०-3 निम्नलिखित वाक्यों में रंगीन छपे शब्दों के उचित विलोम शब्द चुनकर भरिए।

1) शिक्षित व्यक्ति सदैव तरक्की करता है, जबकि अशिक्षित व्यक्ति असफल होता है।
मुशिक्षित - अनपढ़ - कुशिक्षित - अशिक्षित

2) व्यापारी व्यापार में लाभ — पर बहुत ध्यान रखते हैं।
नुक्सान - नफा - हानि - फायदा

3) मेरा भाई मेरा — है और मैं उसका भ्रातृज हैं।
दुर्जन - अशिष्ट - अनुज - कनिष्ठ

4) गंगा का जल निर्मल होता है, जबकि नाल का जल — होता है।
कौमल - अपवित्र - मलिन - गंदा

5) कक्षा में बच्चों ने शोर मचाकर आकाश — एक कर दिया।
भरती - पाताल - स्वर्ग - क्षिति

SOCIAL STUDIES

1. Paste pictures of different types of Landforms and write about each of them in your Geography notebook. Find more about the Three tier system of Panchayati Raj and make a poster on A3 size sheet. Revise all the chapters done till now.

1. On an outline map of India locate the following:

- a) Indian states
- b) Neighboring countries
- c) Water bodies on three sides of India

2. On the world map locate the following: a). Continents b) Oceans

1. Draw five major political parties symbol in your Scrapbook
2. How many constituencies in Delhi? Write their name with their representative within a party symbol.
3. What are the universal adult franchises?
4. Motivate your elder for voting in your area.
5. Write five Slogan related with election.
6. Paste 5 main news of elections of different parties.

Quiz

1. Which of the following is not a feature of Election system in India?

- A. Universal Adult Franchise B. Secret Voting

C. Reservation of seats in the legislature for the members of Scheduled Castes and Scheduled Tribes

D. Communal Electorate

2. Elections in India for Parliament and State Legislatures are conducted by.....

- A. President B. State Election Commission C. Governor D. Election Commission of India

3. Members of Election Commission are appointed by.....

- A. President of India B. Prime Minister of India C. Elected by the people D. Chief Justice of India

4. Which article of the Indian constitution says that will be an election commission in India?

- A. Article 124 B. Article 342 C. Article 324 D. Article 115

5. The number of seats reserved for scheduled caste in the Lok sabha is:

- A. 59 B. 79 C. 89 D. 99

6. Which Articles in the Constitution give provisions for the electoral system in our country?

- A. Articles 124-128 B. Articles 324-329 C. Articles 256-259 D. Articles 274-279

7. The elections for Lok Sabha are held every:

- A. 3 years B. 4 years C. 5 years D. 6 years

8. Which among the following statements is/are false?

1. For qualifying to the Lok Sabha, a person must be at least 25 years of age
2. A person can be a member of both Lok Sabha and Rajya Sabha at the same time
3. A person belonging to Scheduled Caste and Scheduled Tribe can contest elections from a general seat also, and not just with the reserved seat
4. If a member of either of the Houses votes against the directions given by his party, he can be deemed to be disqualified

Code:

- A. Only 1 B. Only 2 and 4 C. Only 3 D. Only 2

9. What is the maximum allowed duration between the last session of the dissolved Lok Sabha and therecalling of the Lok Sabha?

- A. 2 months B. 4 months C. 5 months D. 6 months

10. Which is the smallest Lok Sabha Constituency in General Elections by area?

- A. Delhi Sadar B. Mumbai South C. Kolkata North West D. Chandni Chowk, Delhi

Q. Do the worksheet given below:-

Ancient River Valley Civilisation

Fill in the Blanks using the words from the brackets.

(Monuments, Historians, Great epics, Archaeology, Mohenjodaro and Harappa, Citadel and lower town, Indus, River valley civilisation, Lothal)

1. People who write history are known as _____.
2. _____ is the study of remains of ancient past.
3. The Mahabharata and Ramayana are the two _____ that tell us about our past.
4. Old builds that are historically important are called _____.
5. The Indus valley civilisation was also known as the _____.
6. Mohenjodaro is located on the banks of the _____ river.
7. Harappan cities were divided into _____ and _____.
8. The two cities of the Indus Valley civilisation were _____ and _____.
9. _____ was a port were ships could dock.

Give one-word answers:

- a) The tribe that invaded ancient Egypt
 - b) The Egyptian God for cats
 - c) The Pharaoh who built Abu Simbel
 - d) The God of mummification
 - e) A very powerful Egyptian Queen who was crowned the Pharaoh
 - f) The meaning of the word 'Pharaoh'
 - g) The Egyptian system of writings
 - h) Sheets of paper was made from this
 - i) A mythological figure with the head of a man and the body of a lion
 - j) The Egyptians followed this calendar
- 2) Write True or False
- a) The Egyptian King was called Sultan
 - b) Egypt is called the Gift of the Nile
 - c) Amun- Ra was the chief God
 - d) Slaves were at the lowest rung
 - e) The Egyptian script was called the cuneiform
 - f) Senet was a popular outdoor game

French

1. Make a small photo album on French culture.
2. revise your April may syllabus.

Sanskrit

पाठ-1 और 2 याद करो और लिखो ।

कार्य पत्रिका -1 और 2 करो ।

तीन लिंगों के 10-10 नए शब्द ढूंढ कर चित्र सहित एक चार्ट पर लिखकर चिपकाए।

कार्यपत्रिका - 1 **Worksheet-1**

संस्कृत-वर्णमाला

नाम कक्षा दिनांक

1. स्वरान् व्यञ्जनानि च पृथक्-पृथक् लिखत । (स्वर और व्यंजन को अलग-अलग करके लिखिए ।)

द, उ, त्, ऋ, ह, ई, च्, ऐ, ल्, ऊ

स्वरा:	व्यञ्जनानि
(क)
(ख)
(ग)
(घ)
(ङ)

2. वर्णसंयोगं कुरुत । (वर्ण-संयोग कीजिए ।)

(क) श् + र् + अ + म् + अः	=
(ख) क् + अ + क् + ष् + आ	=
(ग) न् + अ + द् + ई	=
(घ) व् + अ् + न् + द् + अ + न् + आ	=
(ङ) ज् + ज् + आ + न् + ई	=

3. वर्णविच्छेदं कुरुत । (वर्ण-विच्छेद कीजिए ।)

(क) चन्द्रः	=
(ख) मयूरः	=
(ग) श्रमिकः	=
(घ) वृक्षः	=
(ङ) अध्यापकः	=

4. अधोलिखित स्वरान् उचितस्तम्भेषु लिखत। (नीचे लिखे स्वरों को उचित स्तम्भों में लिखिए।)

स्वराः— अ, ऊ, ए, इ, ऋ, ओ, उ, ई, ऐ, आ, औ, ऋ

ह्रस्व स्वराः	दीर्घ स्वराः	संयुक्त स्वराः
(क)
(ख)
(ग)
(घ)

5. रिक्तस्थानानि पूरयत। (रिक्त स्थानों की पूर्ति कीजिए।)

- (क) भाषा की सबसे छोटी इकाई होते हैं।
- (ख) संस्कृत में स्वर का प्रयोग नहीं होता है।
- (ग) स्वर प्रकार के होते हैं।
- (घ) स्पर्श व्यंजनों की संख्या है।
- (ङ) व्यंजनों के उच्चारण के समय मुख से गरम वायु निकलती है।
- (च) दो असमान स्वरों के मेल से व्यंजन बनते हैं।

6. उचितवर्णैः रिक्तस्थानानि पूरयत। (उचित वर्णों द्वारा रिक्त स्थानों की पूर्ति कीजिए।)

- (क) शोभनम् - श् + + भ् + अ + न् + + म्
- (ख) पठन्ति - प् + अ + + अ + न् + + इ
- (ग) माला - म् + + ल् +
- (घ) ज्ञानी - + ज् + आ + न् +
- (ङ) उपरि - उ + + अ + + इ
- (च) पत्रम् - प् + अ + + र् + + म्

संस्कृतशब्द-परिचयः

कक्षा

दिनांक

निम्नशब्दानां लिङ्गानुसारं विभाजनं कुरुत। (निम्न शब्दों का लिंग के अनुसार विभाजन कीजिए।)

दुग्धम्, पत्राणि, सैनिकाः, नासिका, अजा, खगाः, मक्षिका, धनम्, पुस्तके, ग्रन्थः, नरः, कलिकाः

पुल्लिङ्ग

स्त्रीलिङ्ग

नपुंसकलिङ्ग

(क)

(ख)

(ग)

(घ)

शब्दरूपाणि लिखत। (शब्द-रूप लिखिए।)

एकवचनम्

द्विवचनम्

बहुवचनम्

(क) लता

(ख) बालकः

(ग)

(घ)

(ङ)

(च)

फले

पुष्पे

नराः

महिलाः

निम्नपदानां वचनानुसारं विभाजनं कुरुत। (निम्नलिखित पदों का विभाजन वचनों के अनुसार कीजिए।)

गजाः, मत्स्यौ, पिकः, नेत्रे, देवः, पर्वताः, शुकौ, फलानि, श्रमिकौ, चन्द्रः, पुष्पाणि, वनम्

एकवचनम्

द्विवचनम्

बहुवचनम्

(क)

(ख)

DRAWING

1 Page number 22 to 26, draw and shading in your drawing copy

2 Do the craft work from the given link

Class thinkers

1. (<https://pin.it/5JoKbFFBP>)
2. (<https://pin.it/lgYzQKprg>)

Class achievers

1. <https://pin.it/6jHhO65GZ>
2. <https://pin.it/2CvghkYzS>

G.K

1. Raja Ravi Varma, recently seen in the news, was associated with which field?

2. Recently, where was the 'Critical Minerals Summit 2024' held?

3. Recently, which trade association has launched a corporate governance charter for startups?

4. Which state's education department recently released the 'Guidelines for Elimination of Corporal Punishment (GECP)'?

5. Recently, which Indian has been selected for the 'Goldman Environmental Prize 2024'?

6. Recently, the Indian government has permitted exports of onion to which countries despite the export ban?

7. What is INS Vikrant, recently seen in news?

8. Which organization recently released a satellite-data-based analysis on the expansion of glacial lakes in the catchments of Indian Himalayan river basins?

9. Which country's parliament recently passed a law criminalizing same-sex relationships?

10. Recently, which IIT has been granted a patent for its cost-effective inverter?

11. Red Columbus Conservation Action Plan, recently seen in news, is an initiative of which organization?

13. Ajrakh textile craft, recently seen in news, is mainly associated with which state?

14. Recently, which city is constructing the world's largest airport, Al Maktoum International Airport?

15. Which country has recently proposed to reclassify marijuana as a less dangerous drug?

16. What is the primary purpose of a Lookout Circular (LOC), recently mentioned in the news?

17. Pension Department has recently launched an online portal for government retirees. what is the name of the portal?

18. Recently, which Indian received the 'Green Oscar' Whitley Gold Award 2024?

19. Recently, Geological Survey of India (GSI) explorers discovered ancient fossils in which hills of Meghalaya?

20. Which is the first state/UT to introduce trial runs of buses powered by hydrogen?

21. Which country is the host of the Asian Athletics Championships 2023?

22. Who has been appointed as the Head Coach of Indian cricket team by the Board of Control for Cricket in India (BCCI)?

23. Which film received the Special Jury or Silver Peacock Award at the 54th International Film Festival of India?

24. What is the causative agent of white lung' syndrome that was recently making news?